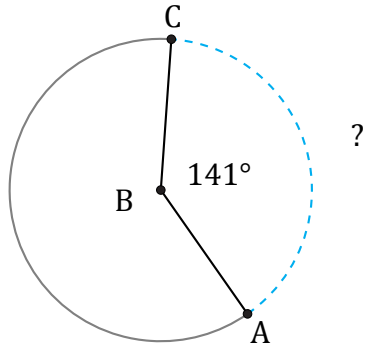


# Longitud de Arcos (I)

Nombre: \_\_\_\_\_

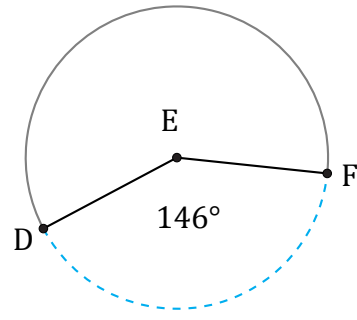
Fecha: \_\_\_\_\_

Calcule la longitud de cada arco.



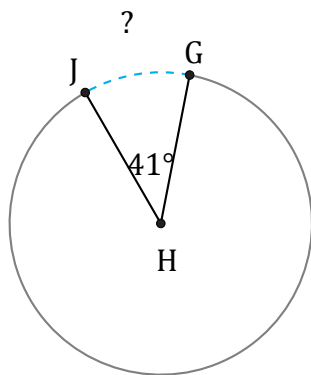
Radio = 713 mi

$\widehat{AC} =$



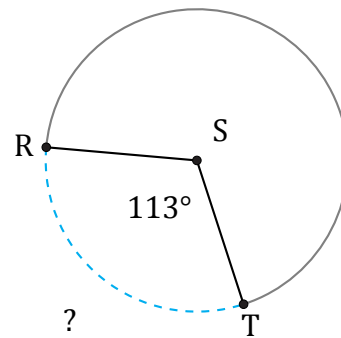
Radio = 84 AU

$\widehat{DF} =$



Radio = 6 cm

$\widehat{GJ} =$



Radio = 565 cm

$\widehat{RT} =$