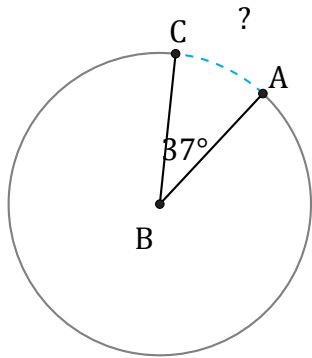


# Longitud de Arcos (B)

Nombre: \_\_\_\_\_

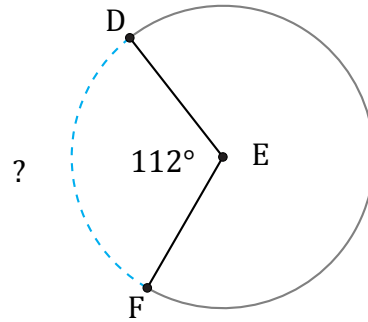
Fecha: \_\_\_\_\_

Calcule la longitud de cada arco.



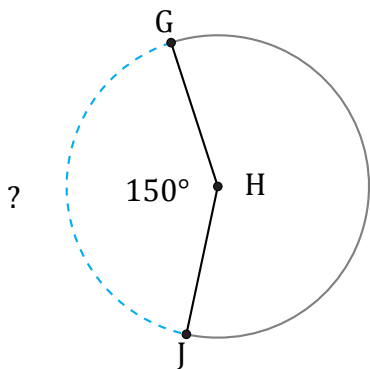
Radio = 75 mi

$\widehat{AC} =$



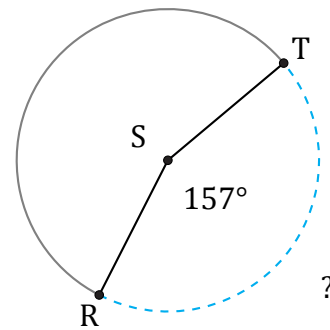
Radio = 847 in

$\widehat{DF} =$



Diámetro = 1034 km

$\widehat{GJ} =$



Diámetro = 190 km

$\widehat{RT} =$