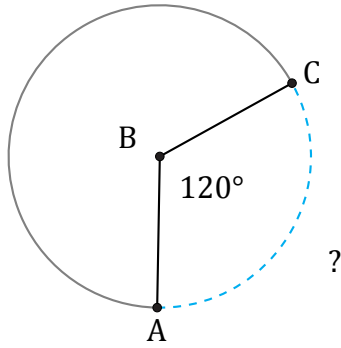


Longitud de Arcos (C)

Nombre: _____

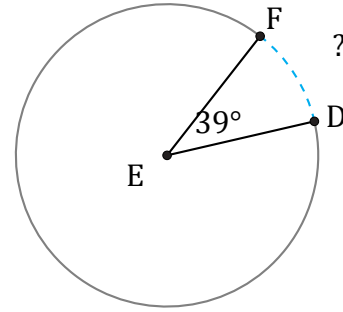
Fecha: _____

Calcule la longitud de cada arco.



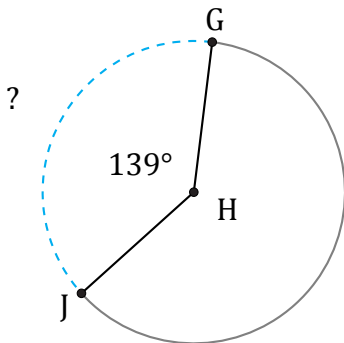
Diámetro = 162 in

$\widehat{AC} =$



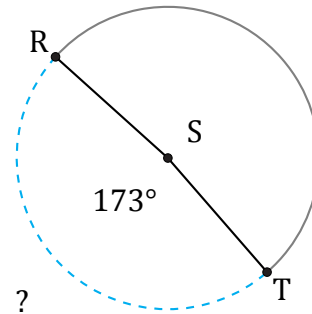
Diámetro = 4 ft

$\widehat{DF} =$



Radio = 4 mi

$\widehat{GJ} =$



Radio = 7 ft

$\widehat{RT} =$