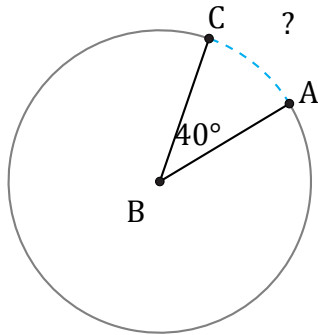


Longitud de Arcos (F)

Nombre: _____

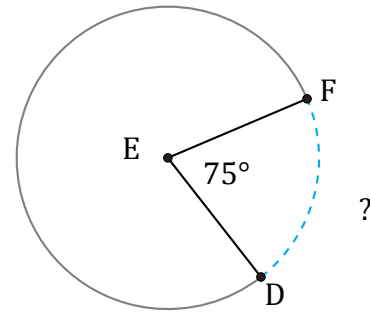
Fecha: _____

Calcule la longitud de cada arco.



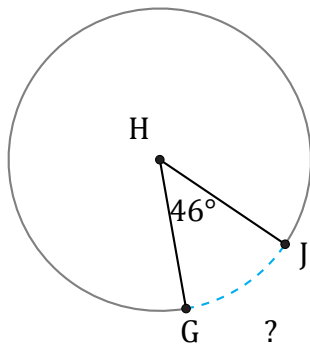
Radio = 351 mm

$\widehat{AC} =$



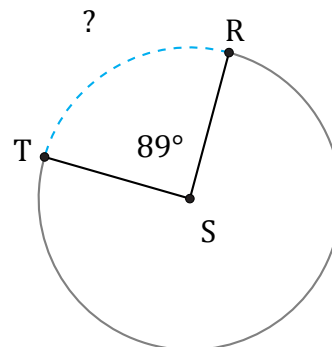
Diámetro = 136 ft

$\widehat{DF} =$



Diámetro = 16 m

$\widehat{GJ} =$



Radio = 66 mm

$\widehat{RT} =$