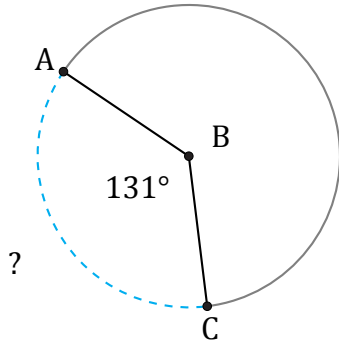


Longitud de Arcos (G)

Nombre: _____

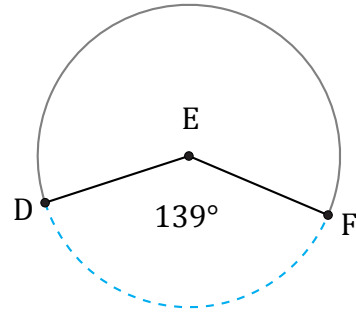
Fecha: _____

Calcule la longitud de cada arco.



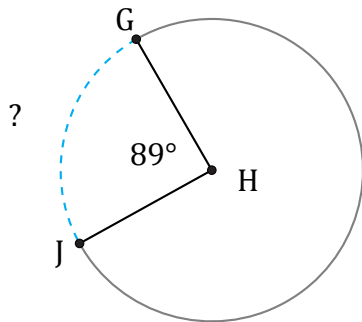
Diámetro = 676 AU

$\widehat{AC} =$



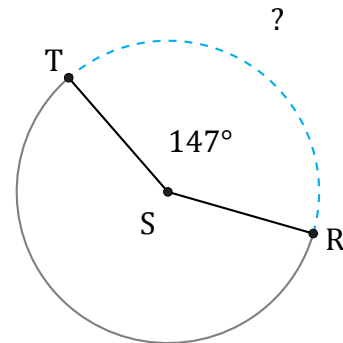
Diámetro = 898 ft

$\widehat{DF} =$



Radio = 949 mm

$\widehat{GJ} =$



Radio = 254 mm

$\widehat{RT} =$