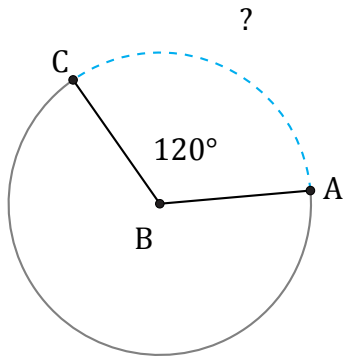


Longitud de Arcos (I)

Nombre: _____

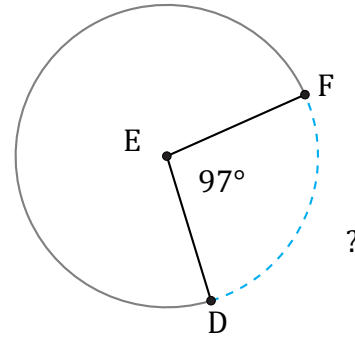
Fecha: _____

Calcule la longitud de cada arco.



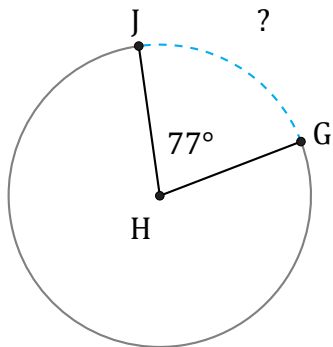
Radio = 78 ft

$\widehat{AC} =$



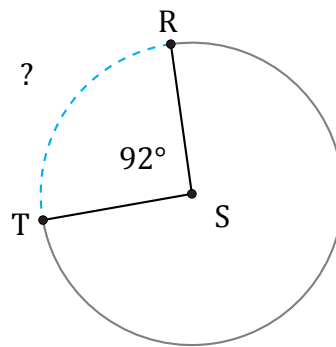
Diámetro = 6 cm

$\widehat{DF} =$



Radio = 357 m

$\widehat{GJ} =$



Diámetro = 24 km

$\widehat{RT} =$