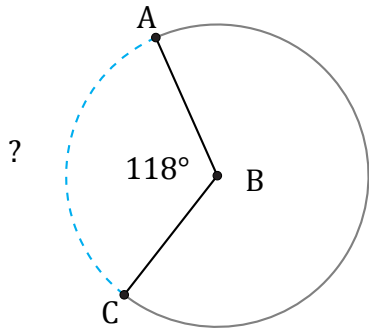


Longitud de Arcos (A)

Nombre: _____

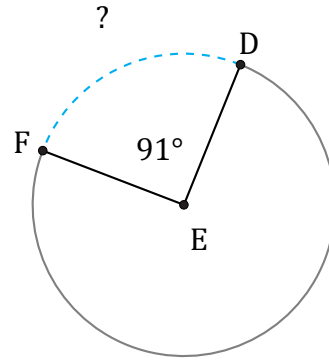
Fecha: _____

Calcule la longitud de cada arco.



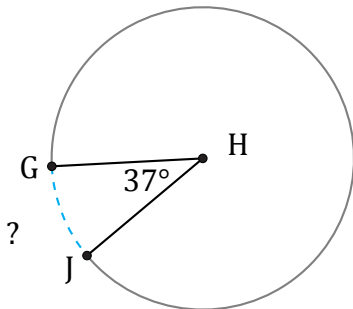
Circunferencia = 43.98 mm

$\widehat{AC} =$



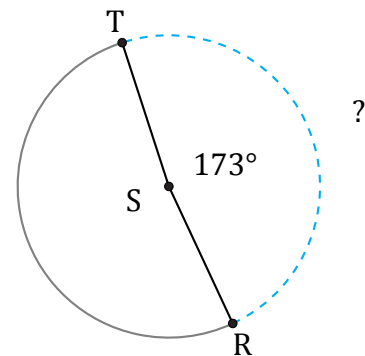
Diámetro = 82 mm

$\widehat{DF} =$



Radio = 21 km

$\widehat{GJ} =$



Radio = 5 m

$\widehat{RT} =$