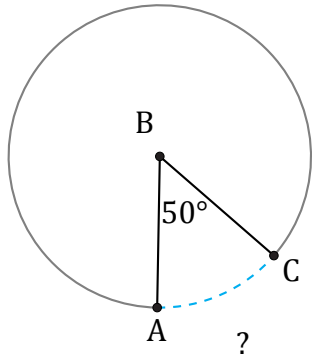


Longitud de Arcos (B)

Nombre: _____

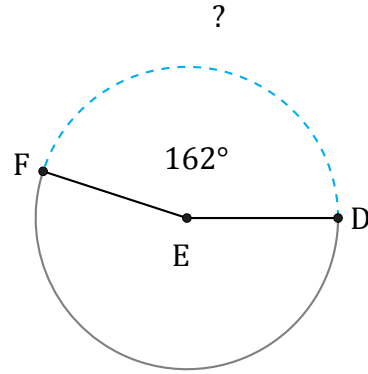
Fecha: _____

Calcule la longitud de cada arco.



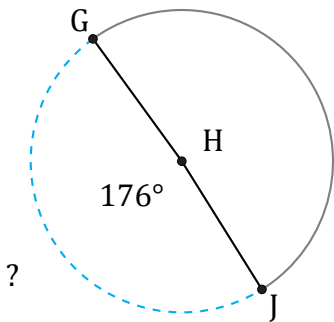
Circunferencia = 31.42 in

$\widehat{AC} =$



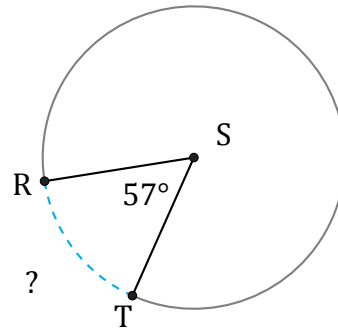
Radio = 16 mi

$\widehat{DF} =$



Diámetro = 6 in

$\widehat{GJ} =$



Diámetro = 1766 mm

$\widehat{RT} =$