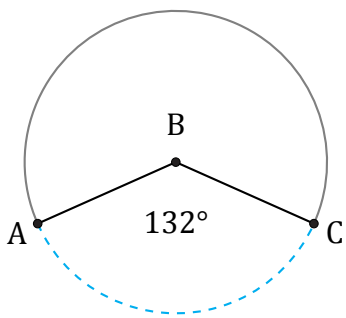


Longitud de Arcos (C)

Nombre: _____

Fecha: _____

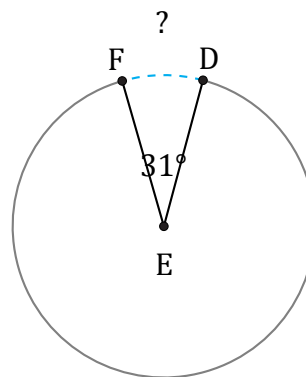
Calcule la longitud de cada arco.



?

Radio = 1 cm

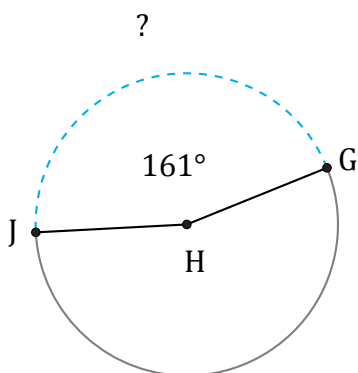
$\widehat{AC} =$



?

Diámetro = 82 km

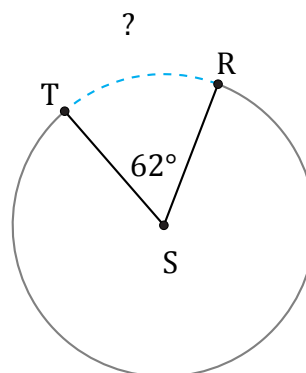
$\widehat{DF} =$



?

Circunferencia = 106.81 mi

$\widehat{GJ} =$



?

Circunferencia = 2211.68 km

$\widehat{RT} =$