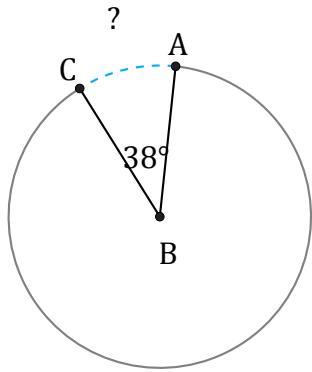


# Longitud de Arcos (D)

Nombre: \_\_\_\_\_

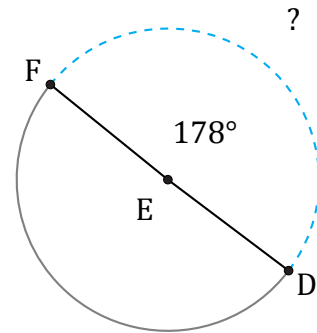
Fecha: \_\_\_\_\_

Calcule la longitud de cada arco.



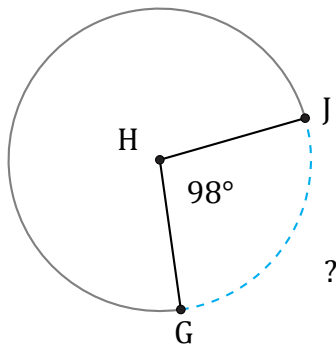
Diámetro = 8 cm

$\widehat{AC} =$



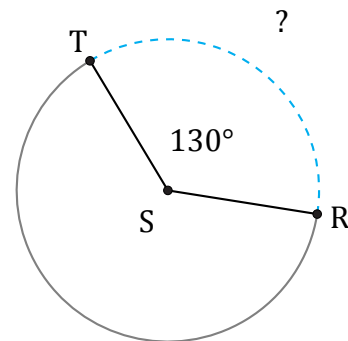
Radio = 72 ft

$\widehat{DF} =$



Circunferencia = 131.95 mm

$\widehat{GJ} =$



Radio = 9 mm

$\widehat{RT} =$