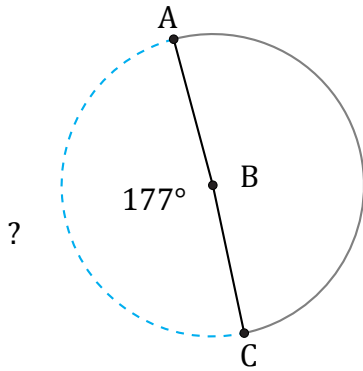


Longitud de Arcos (E)

Nombre: _____

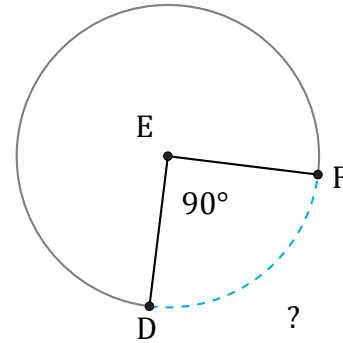
Fecha: _____

Calcule la longitud de cada arco.



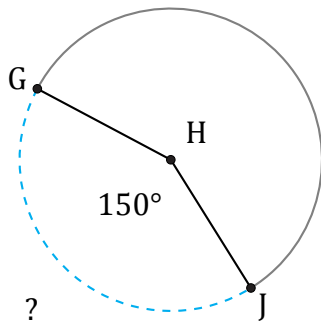
Circunferencia = 565.49 m

$\widehat{AC} =$



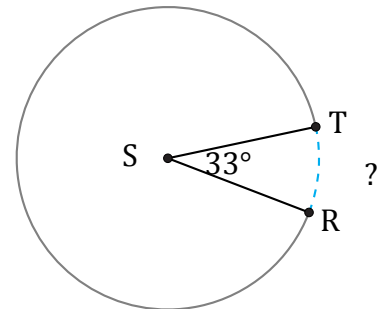
Diámetro = 1882 km

$\widehat{DF} =$



Diámetro = 86 AU

$\widehat{GJ} =$



Radio = 69 km

$\widehat{RT} =$