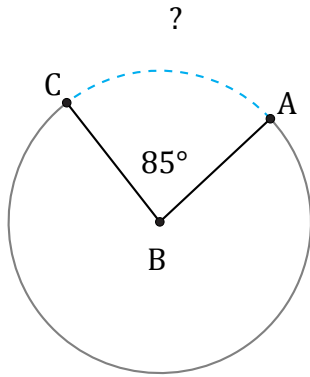


Longitud de Arcos (F)

Nombre: _____

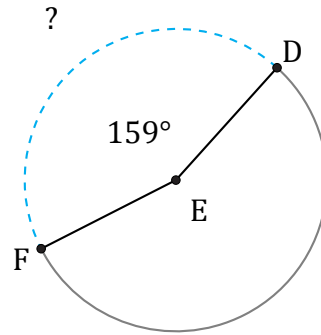
Fecha: _____

Calcule la longitud de cada arco.



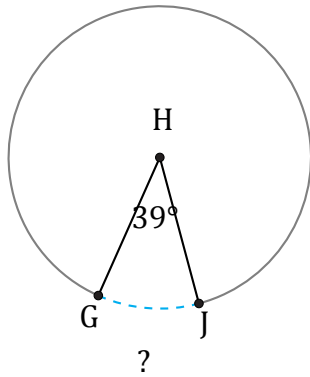
Circunferencia = 2701.77 km

$\widehat{AC} =$



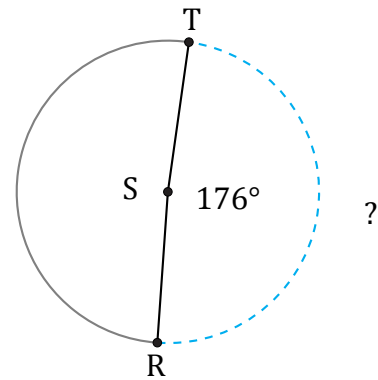
Radio = 684 km

$\widehat{DF} =$



Circunferencia = 43.98 mm

$\widehat{GJ} =$



Diámetro = 1824 cm

$\widehat{RT} =$