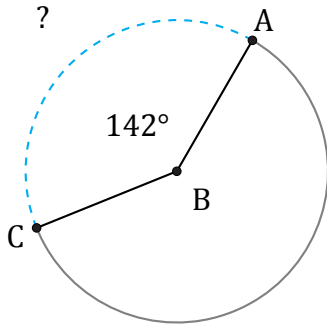


# Longitud de Arcos (G)

Nombre: \_\_\_\_\_

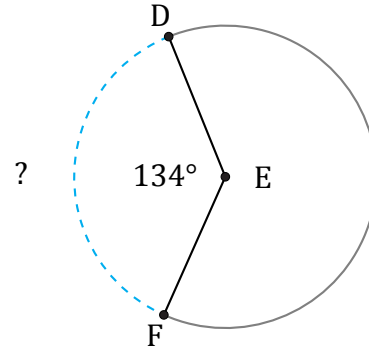
Fecha: \_\_\_\_\_

Calcule la longitud de cada arco.



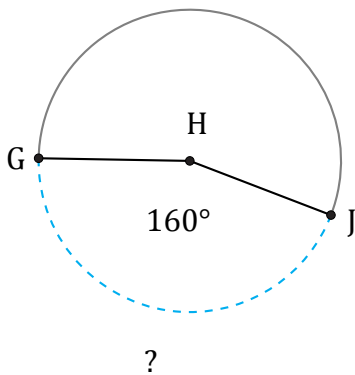
Radio = 7 mi

$\widehat{AC} =$



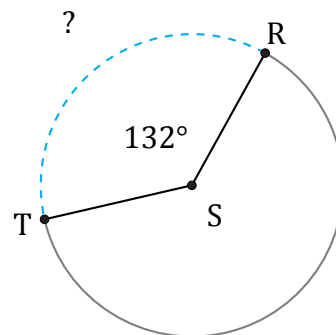
Circunferencia = 56.55 km

$\widehat{DF} =$



Diámetro = 994 cm

$\widehat{GJ} =$



Circunferencia = 18.85 km

$\widehat{RT} =$