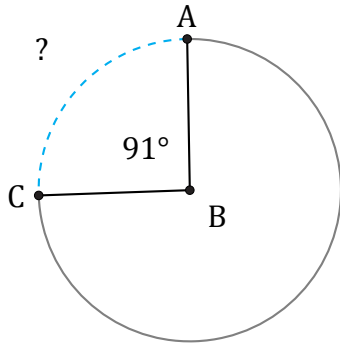


# Longitud de Arcos (H)

Nombre: \_\_\_\_\_

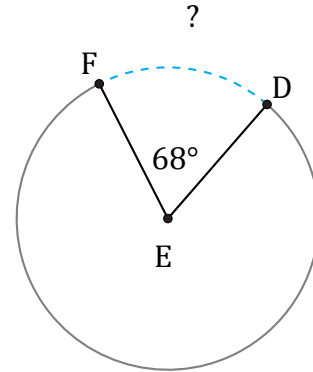
Fecha: \_\_\_\_\_

Calcule la longitud de cada arco.



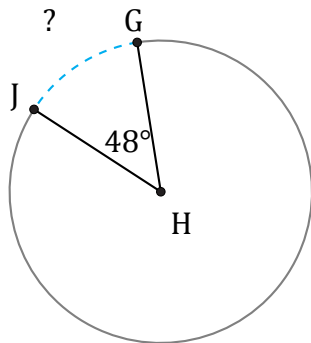
Radio = 27 ft

$\widehat{AC} =$



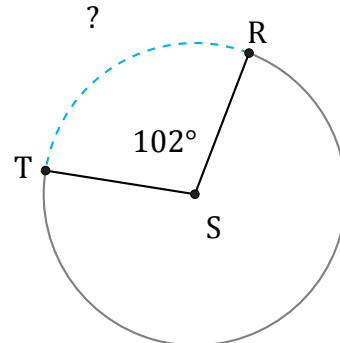
Circunferencia = 43.98 ft

$\widehat{DF} =$



Diámetro = 12 in

$\widehat{GJ} =$



Circunferencia = 534.07 mi

$\widehat{RT} =$