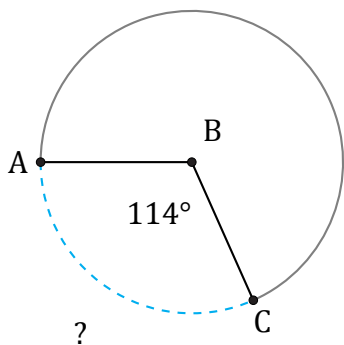


# Longitud de Arcos (J)

Nombre: \_\_\_\_\_

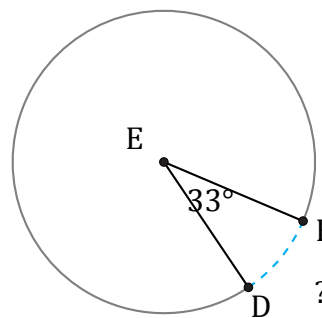
Fecha: \_\_\_\_\_

Calcule la longitud de cada arco.



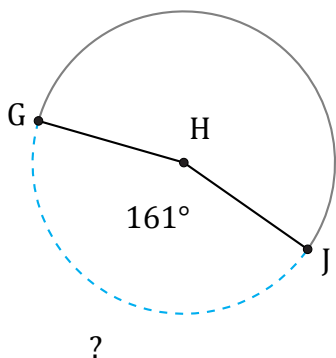
Radio = 408 mm

$\widehat{AC} =$



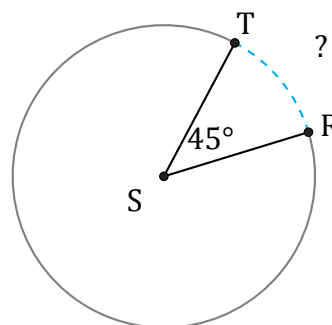
Radio = 46 km

$\widehat{DF} =$



Circunferencia = 1156.11 mm

$\widehat{GJ} =$



Diámetro = 10 mm

$\widehat{RT} =$