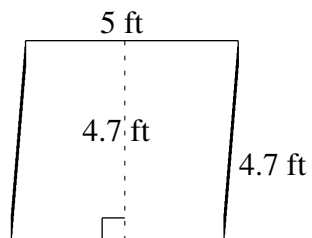
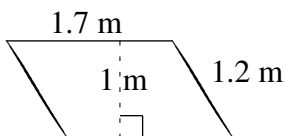
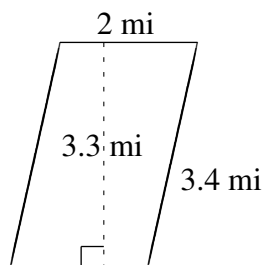
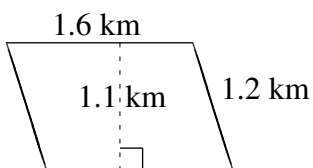
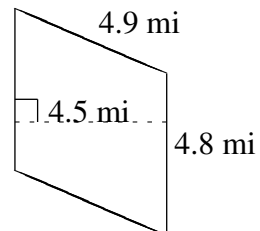
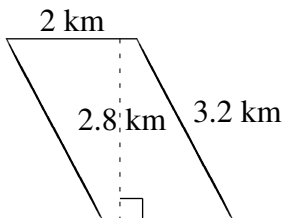


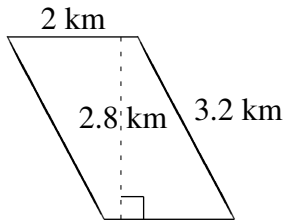
## Área y Perímetro de Paralelogramos (B)

Halle el área y el perímetro de cada paralelogramo.

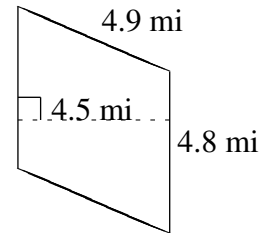


# Área y Perímetro de Paralelogramos (B) Respuestas

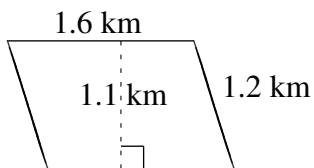
Halle el área y el perímetro de cada paralelogramo.



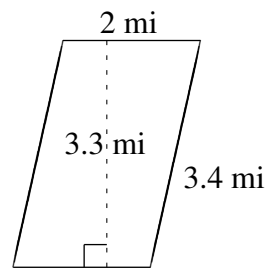
$$A = 5.6 \text{ km}^2$$
$$P = 10.4 \text{ km}$$



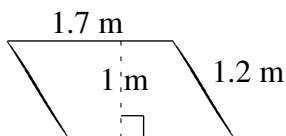
$$A = 21.60 \text{ mi}^2$$
$$P = 19.4 \text{ mi}$$



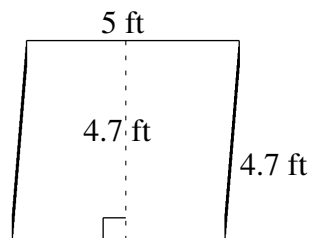
$$A = 1.76 \text{ km}^2$$
$$P = 5.6 \text{ km}$$



$$A = 6.6 \text{ mi}^2$$
$$P = 10.8 \text{ mi}$$



$$A = 1.7 \text{ m}^2$$
$$P = 5.8 \text{ m}$$



$$A = 23.5 \text{ ft}^2$$
$$P = 19.4 \text{ ft}$$