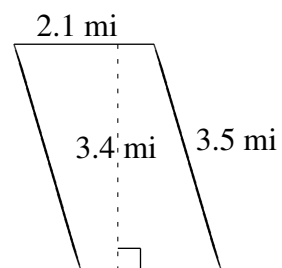
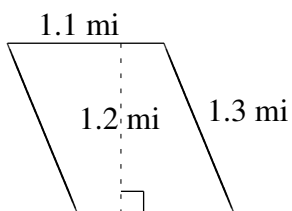
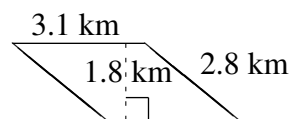
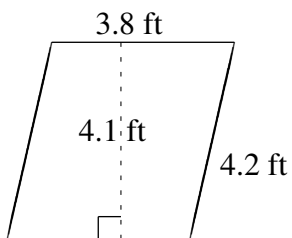
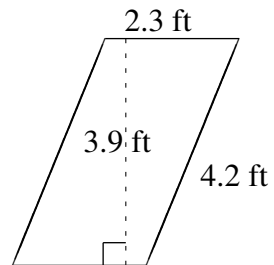
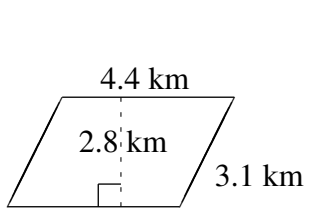


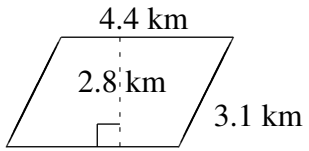
# Área y Perímetro de Paralelogramos (C)

Halle el área y el perímetro de cada paralelogramo.

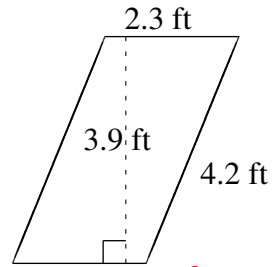


# Área y Perímetro de Paralelogramos (C) Respuestas

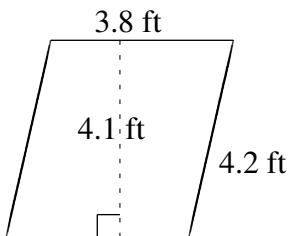
Halle el área y el perímetro de cada paralelogramo.



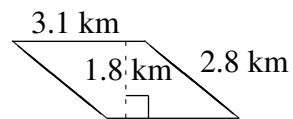
$$A = 12.32 \text{ km}^2$$
$$P = 15.0 \text{ km}$$



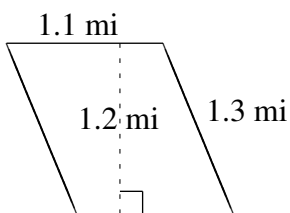
$$A = 8.97 \text{ ft}^2$$
$$P = 13.0 \text{ ft}$$



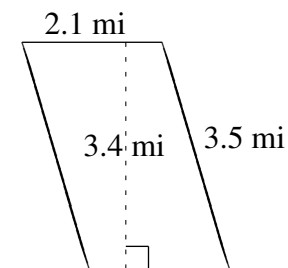
$$A = 15.58 \text{ ft}^2$$
$$P = 16.0 \text{ ft}$$



$$A = 5.58 \text{ km}^2$$
$$P = 11.8 \text{ km}$$



$$A = 1.32 \text{ mi}^2$$
$$P = 4.8 \text{ mi}$$



$$A = 7.14 \text{ mi}^2$$
$$P = 11.2 \text{ mi}$$