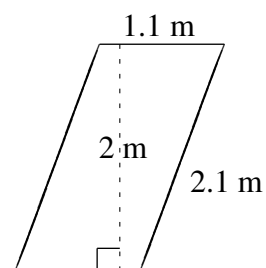
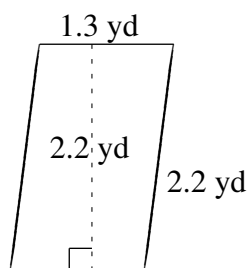
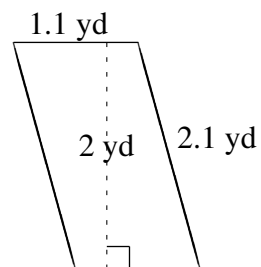
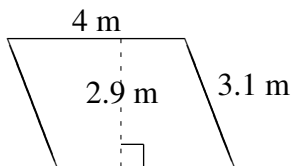
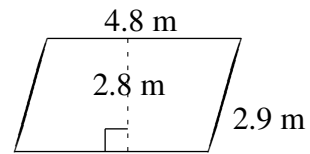
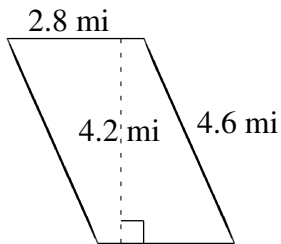


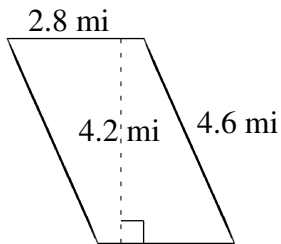
Área y Perímetro de Paralelogramos (E)

Halle el área y el perímetro de cada paralelogramo.

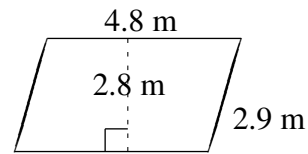


Área y Perímetro de Paralelogramos (E) Respuestas

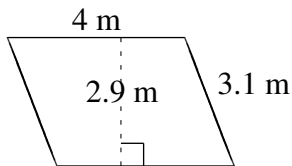
Halle el área y el perímetro de cada paralelogramo.



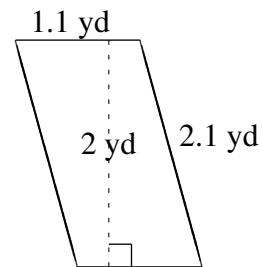
$$A = 11.76 \text{ mi}^2$$
$$P = 14.8 \text{ mi}$$



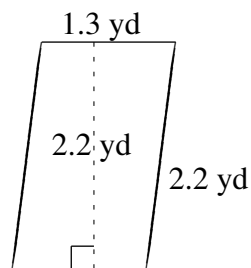
$$A = 13.44 \text{ m}^2$$
$$P = 15.4 \text{ m}$$



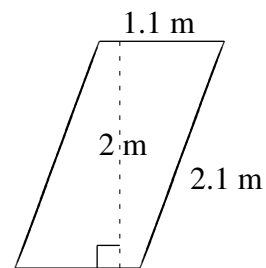
$$A = 11.6 \text{ m}^2$$
$$P = 14.2 \text{ m}$$



$$A = 2.2 \text{ yd}^2$$
$$P = 6.4 \text{ yd}$$



$$A = 2.86 \text{ yd}^2$$
$$P = 7.0 \text{ yd}$$



$$A = 2.2 \text{ m}^2$$
$$P = 6.4 \text{ m}$$