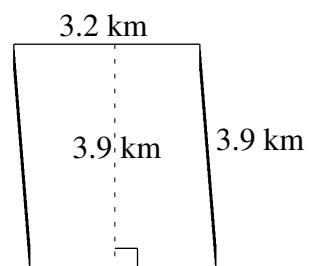
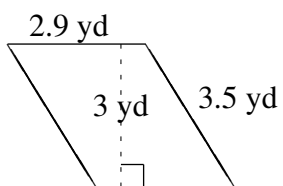
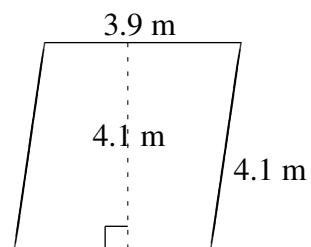
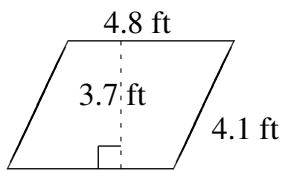
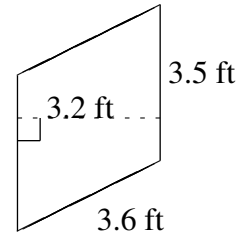
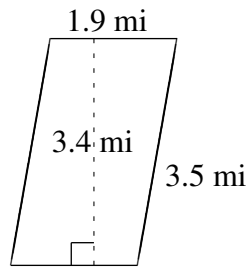


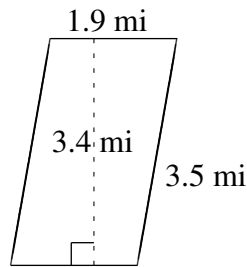
Área y Perímetro de Paralelogramos (G)

Halle el área y el perímetro de cada paralelogramo.

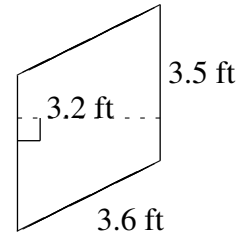


Área y Perímetro de Paralelogramos (G) Respuestas

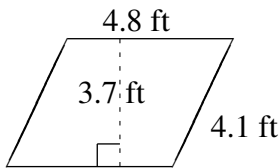
Halle el área y el perímetro de cada paralelogramo.



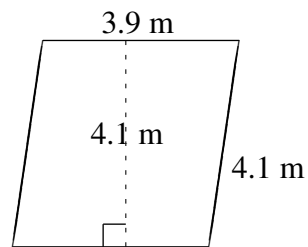
$$A = 6.46 \text{ mi}^2$$
$$P = 10.8 \text{ mi}$$



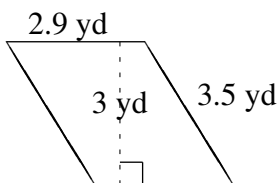
$$A = 11.20 \text{ ft}^2$$
$$P = 14.2 \text{ ft}$$



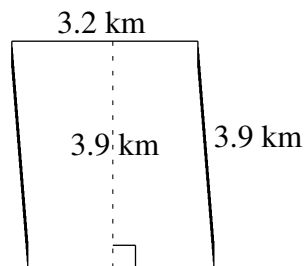
$$A = 17.76 \text{ ft}^2$$
$$P = 17.8 \text{ ft}$$



$$A = 15.99 \text{ m}^2$$
$$P = 16.0 \text{ m}$$



$$A = 8.7 \text{ yd}^2$$
$$P = 12.8 \text{ yd}$$



$$A = 12.48 \text{ km}^2$$
$$P = 14.2 \text{ km}$$