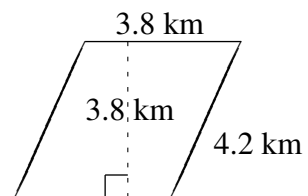
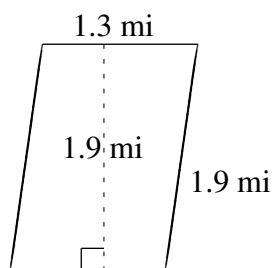
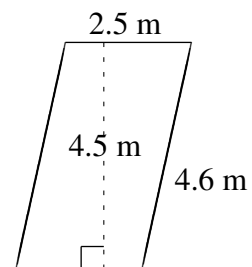
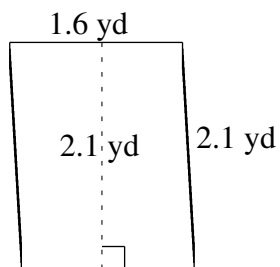
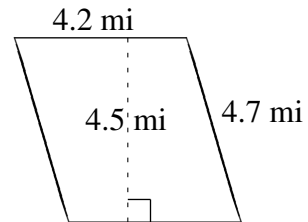
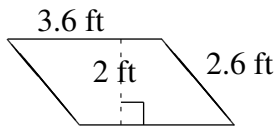


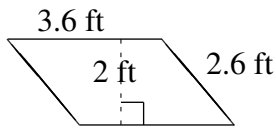
Área y Perímetro de Paralelogramos (H)

Halle el área y el perímetro de cada paralelogramo.

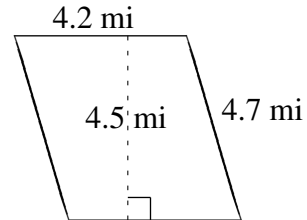


Área y Perímetro de Paralelogramos (H) Respuestas

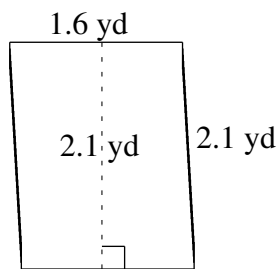
Halle el área y el perímetro de cada paralelogramo.



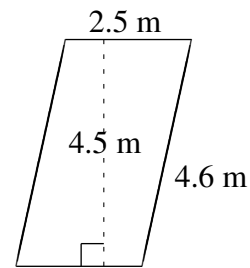
$$A = 7.2 \text{ ft}^2$$
$$P = 12.4 \text{ ft}$$



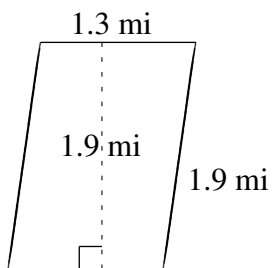
$$A = 18.90 \text{ mi}^2$$
$$P = 17.8 \text{ mi}$$



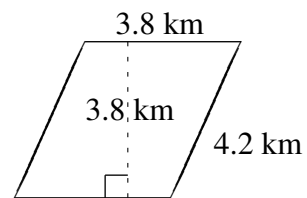
$$A = 3.36 \text{ yd}^2$$
$$P = 7.4 \text{ yd}$$



$$A = 11.25 \text{ m}^2$$
$$P = 14.2 \text{ m}$$



$$A = 2.47 \text{ mi}^2$$
$$P = 6.4 \text{ mi}$$



$$A = 14.44 \text{ km}^2$$
$$P = 16.0 \text{ km}$$