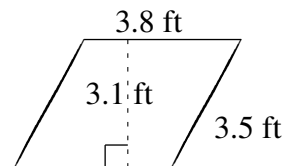
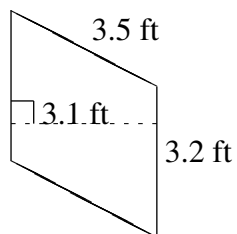
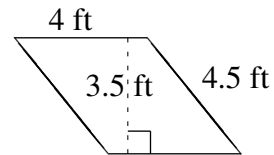
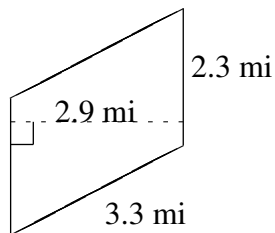
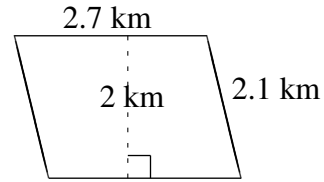
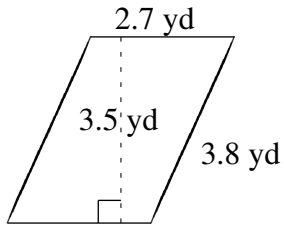


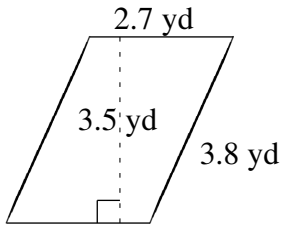
Área y Perímetro de Paralelogramos (I)

Halle el área y el perímetro de cada paralelogramo.

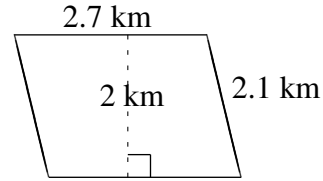


Área y Perímetro de Paralelogramos (I) Respuestas

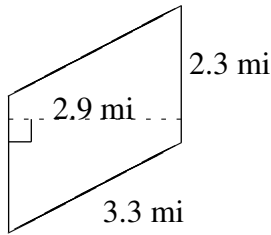
Halle el área y el perímetro de cada paralelogramo.



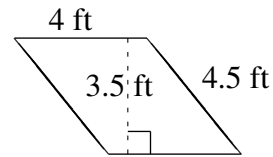
$$A = 9.45 \text{ yd}^2$$
$$P = 13.0 \text{ yd}$$



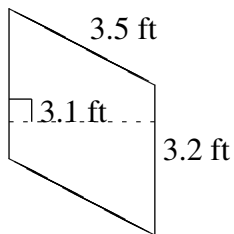
$$A = 5.4 \text{ km}^2$$
$$P = 9.6 \text{ km}$$



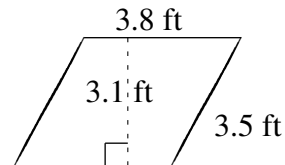
$$A = 6.67 \text{ mi}^2$$
$$P = 11.2 \text{ mi}$$



$$A = 14.0 \text{ ft}^2$$
$$P = 17.0 \text{ ft}$$



$$A = 9.92 \text{ ft}^2$$
$$P = 13.4 \text{ ft}$$



$$A = 11.78 \text{ ft}^2$$
$$P = 14.6 \text{ ft}$$