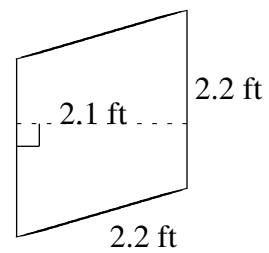
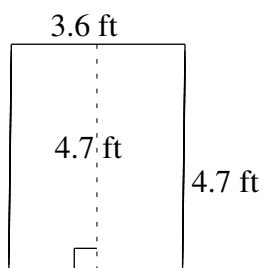
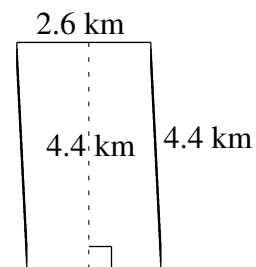
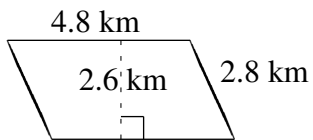
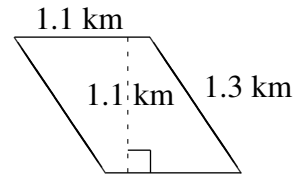
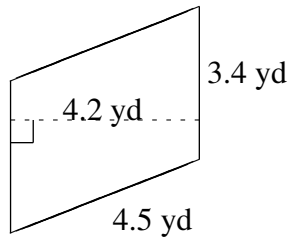


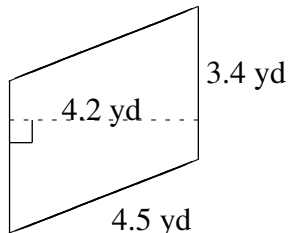
Área y Perímetro de Paralelogramos (J)

Halle el área y el perímetro de cada paralelogramo.

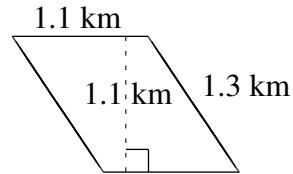


Área y Perímetro de Paralelogramos (J) Respuestas

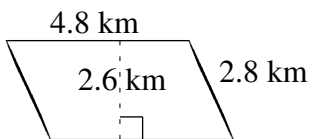
Halle el área y el perímetro de cada paralelogramo.



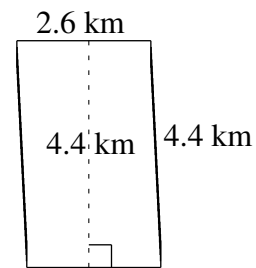
$$A = 14.28 \text{ yd}^2$$
$$P = 15.8 \text{ yd}$$



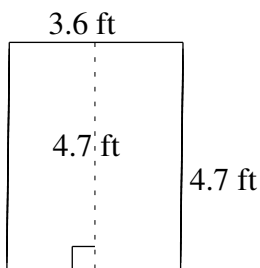
$$A = 1.21 \text{ km}^2$$
$$P = 4.8 \text{ km}$$



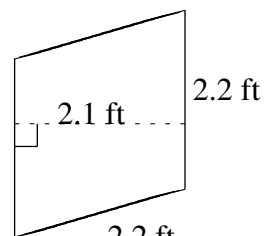
$$A = 12.48 \text{ km}^2$$
$$P = 15.2 \text{ km}$$



$$A = 11.44 \text{ km}^2$$
$$P = 14.0 \text{ km}$$



$$A = 16.92 \text{ ft}^2$$
$$P = 16.6 \text{ ft}$$



$$A = 4.62 \text{ ft}^2$$
$$P = 8.8 \text{ ft}$$