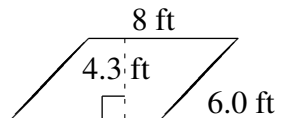
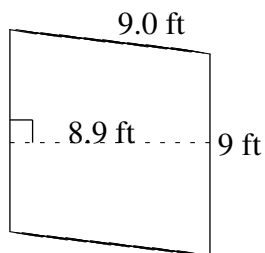
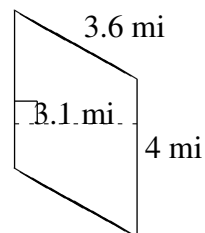
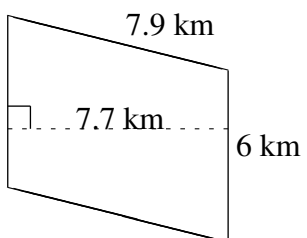
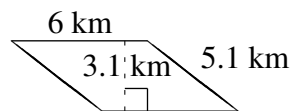
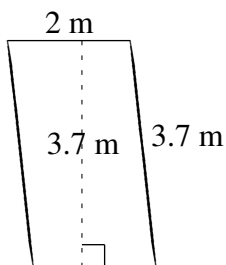


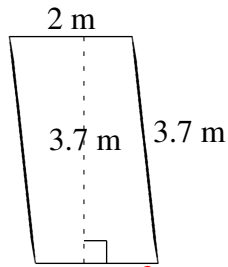
## Área y Perímetro de Paralelogramos (B)

Halle el área y el perímetro de cada paralelogramo.

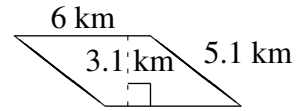


# Área y Perímetro de Paralelogramos (B) Respuestas

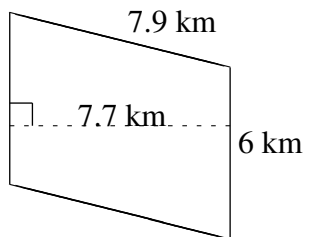
Halle el área y el perímetro de cada paralelogramo.



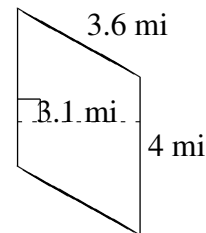
$$A = 7.4 \text{ m}^2$$
$$P = 11.4 \text{ m}$$



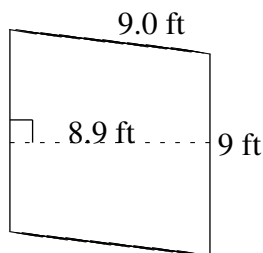
$$A = 18.6 \text{ km}^2$$
$$P = 22.2 \text{ km}$$



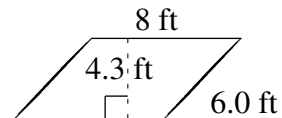
$$A = 46.2 \text{ km}^2$$
$$P = 27.8 \text{ km}$$



$$A = 12.4 \text{ mi}^2$$
$$P = 15.2 \text{ mi}$$



$$A = 80.1 \text{ ft}^2$$
$$P = 36.0 \text{ ft}$$



$$A = 34.4 \text{ ft}^2$$
$$P = 28.0 \text{ ft}$$