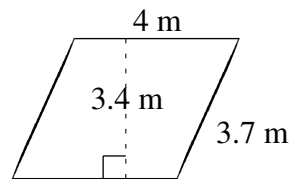
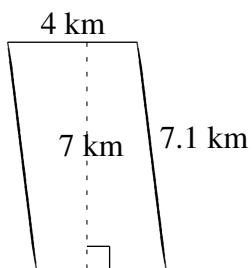
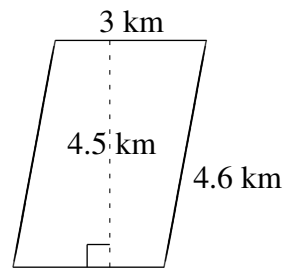
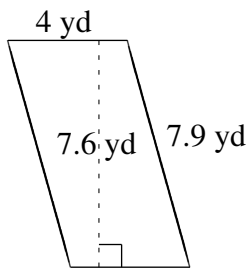
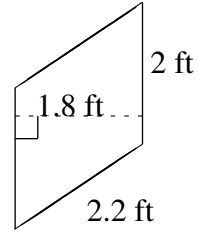
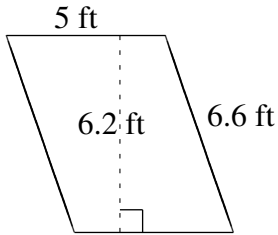


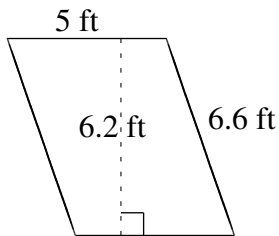
Área y Perímetro de Paralelogramos (C)

Halle el área y el perímetro de cada paralelogramo.

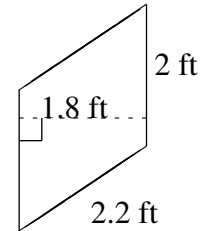


Área y Perímetro de Paralelogramos (C) Respuestas

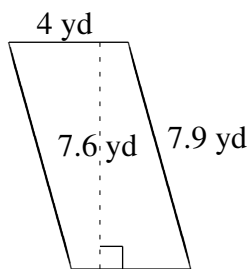
Halle el área y el perímetro de cada paralelogramo.



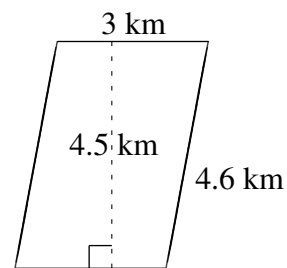
$$A = 31.0 \text{ ft}^2$$
$$P = 23.2 \text{ ft}$$



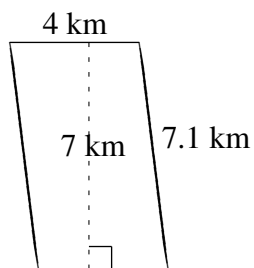
$$A = 3.6 \text{ ft}^2$$
$$P = 8.4 \text{ ft}$$



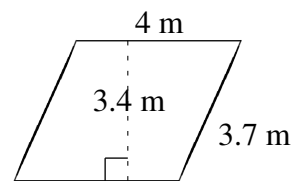
$$A = 30.4 \text{ yd}^2$$
$$P = 23.8 \text{ yd}$$



$$A = 13.5 \text{ km}^2$$
$$P = 15.2 \text{ km}$$



$$A = 28 \text{ km}^2$$
$$P = 22.2 \text{ km}$$



$$A = 13.6 \text{ m}^2$$
$$P = 15.4 \text{ m}$$