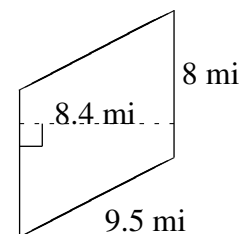
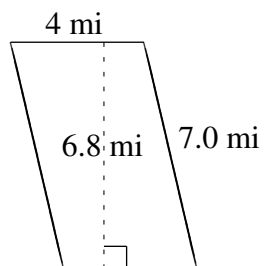
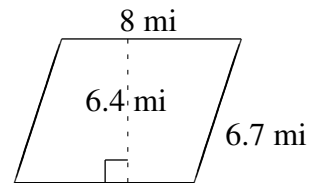
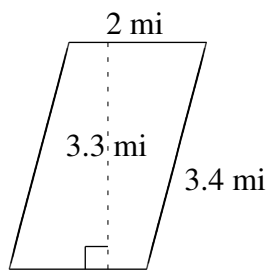
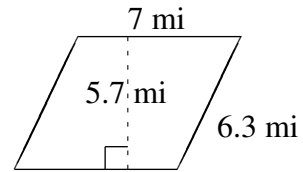
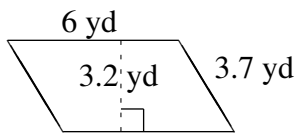


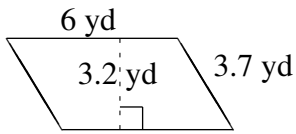
# Área y Perímetro de Paralelogramos (D)

Halle el área y el perímetro de cada paralelogramo.

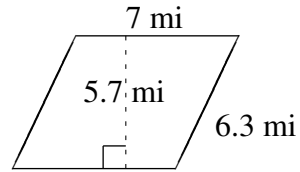


# Área y Perímetro de Paralelogramos (D) Respuestas

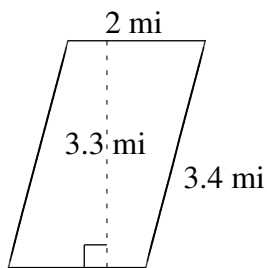
Halle el área y el perímetro de cada paralelogramo.



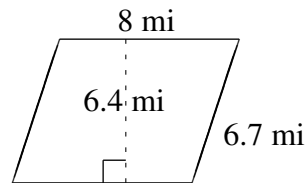
$$A = 19.2 \text{ yd}^2$$
$$P = 19.4 \text{ yd}$$



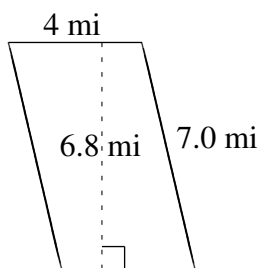
$$A = 39.9 \text{ mi}^2$$
$$P = 26.6 \text{ mi}$$



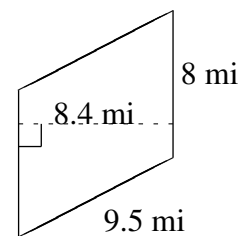
$$A = 6.6 \text{ mi}^2$$
$$P = 10.8 \text{ mi}$$



$$A = 51.2 \text{ mi}^2$$
$$P = 29.4 \text{ mi}$$



$$A = 27.2 \text{ mi}^2$$
$$P = 22.0 \text{ mi}$$



$$A = 67.2 \text{ mi}^2$$
$$P = 35.0 \text{ mi}$$