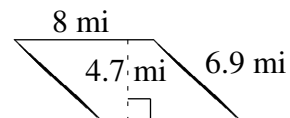
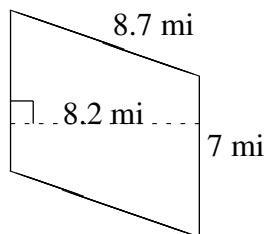
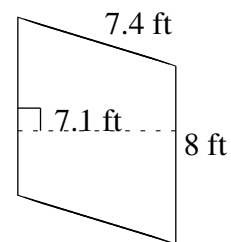
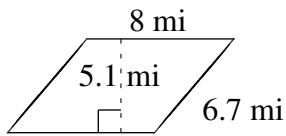
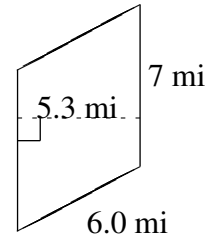
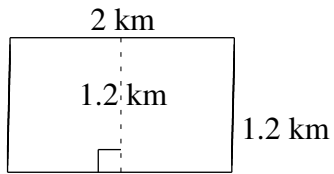


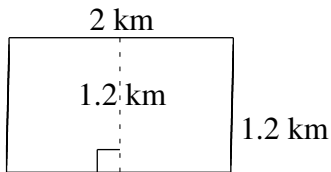
Área y Perímetro de Paralelogramos (F)

Halle el área y el perímetro de cada paralelogramo.

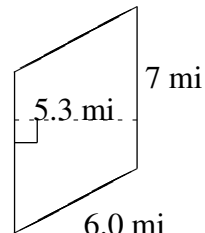


Área y Perímetro de Paralelogramos (F) Respuestas

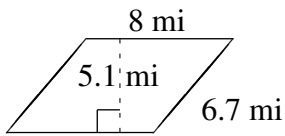
Halle el área y el perímetro de cada paralelogramo.



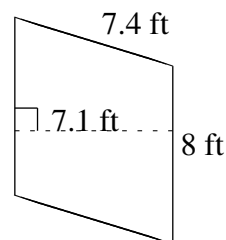
$$A = 2.4 \text{ km}^2$$
$$P = 6.4 \text{ km}$$



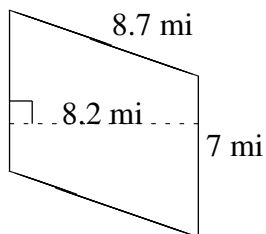
$$A = 37.1 \text{ mi}^2$$
$$P = 26.0 \text{ mi}$$



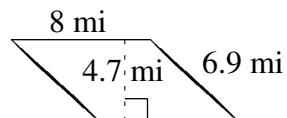
$$A = 40.8 \text{ mi}^2$$
$$P = 29.4 \text{ mi}$$



$$A = 56.8 \text{ ft}^2$$
$$P = 30.8 \text{ ft}$$



$$A = 57.4 \text{ mi}^2$$
$$P = 31.4 \text{ mi}$$



$$A = 37.6 \text{ mi}^2$$
$$P = 29.8 \text{ mi}$$