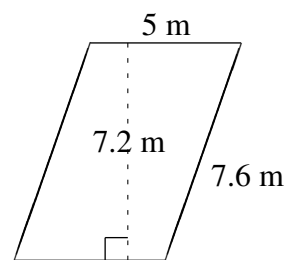
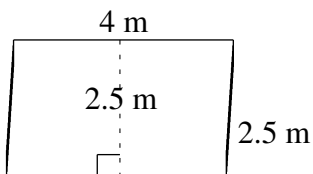
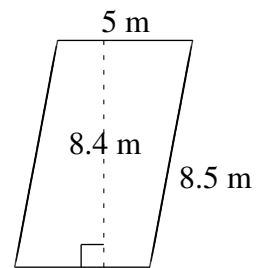
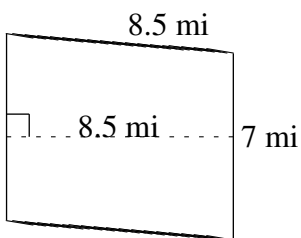
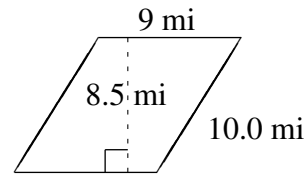
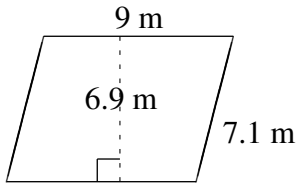


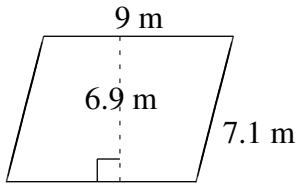
Área y Perímetro de Paralelogramos (G)

Halle el área y el perímetro de cada paralelogramo.

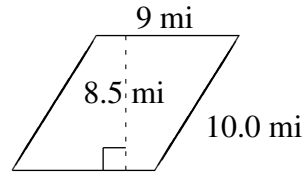


Área y Perímetro de Paralelogramos (G) Respuestas

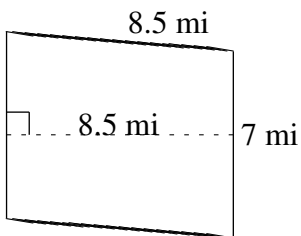
Halle el área y el perímetro de cada paralelogramo.



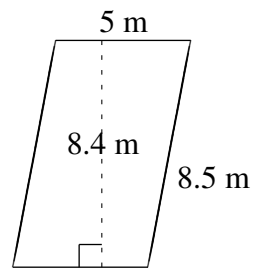
$$A = 62.1 \text{ m}^2$$
$$P = 32.2 \text{ m}$$



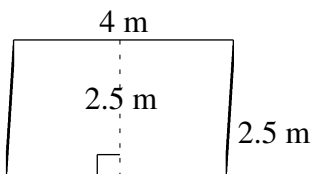
$$A = 76.5 \text{ mi}^2$$
$$P = 38.0 \text{ mi}$$



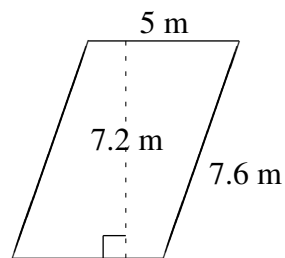
$$A = 59.5 \text{ mi}^2$$
$$P = 31.0 \text{ mi}$$



$$A = 42.0 \text{ m}^2$$
$$P = 27.0 \text{ m}$$



$$A = 10.0 \text{ m}^2$$
$$P = 13.0 \text{ m}$$



$$A = 36.0 \text{ m}^2$$
$$P = 25.2 \text{ m}$$