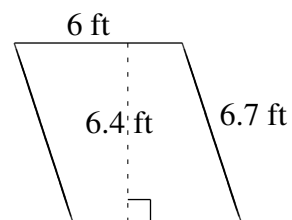
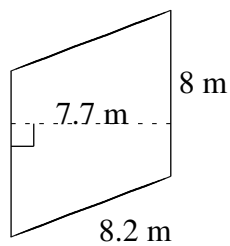
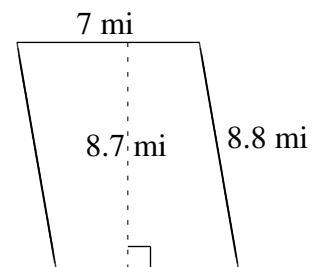
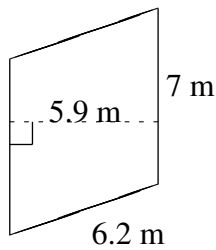
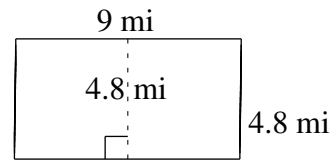
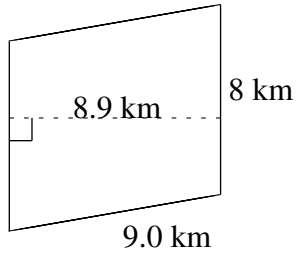


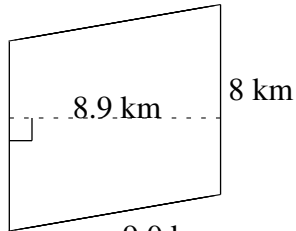
Área y Perímetro de Paralelogramos (H)

Halle el área y el perímetro de cada paralelogramo.

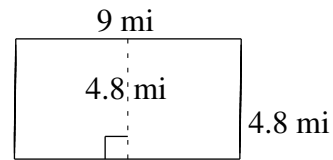


Área y Perímetro de Paralelogramos (H) Respuestas

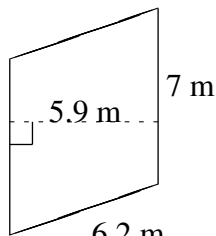
Halle el área y el perímetro de cada paralelogramo.



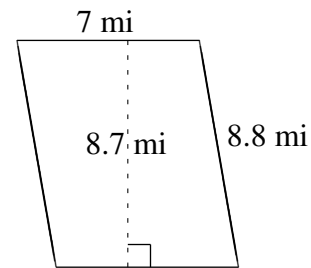
$$A = 71.2 \text{ km}^2$$
$$P = 34.0 \text{ km}$$



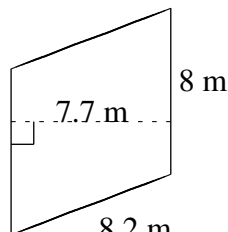
$$A = 43.2 \text{ mi}^2$$
$$P = 27.6 \text{ mi}$$



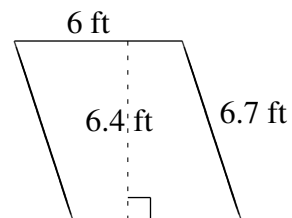
$$A = 41.3 \text{ m}^2$$
$$P = 26.4 \text{ m}$$



$$A = 60.9 \text{ mi}^2$$
$$P = 31.6 \text{ mi}$$



$$A = 61.6 \text{ m}^2$$
$$P = 32.4 \text{ m}$$



$$A = 38.4 \text{ ft}^2$$
$$P = 25.4 \text{ ft}$$