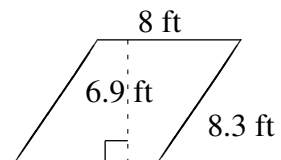
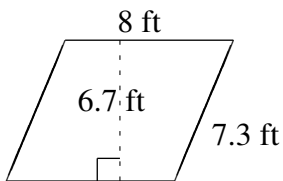
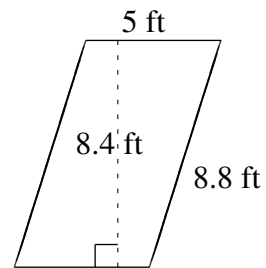
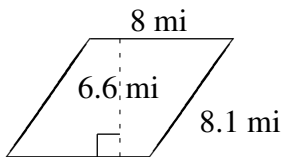
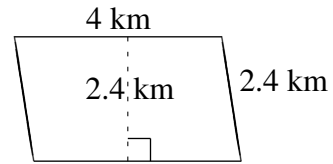
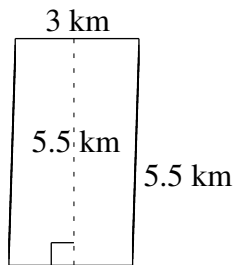


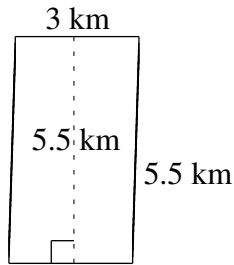
# Área y Perímetro de Paralelogramos (I)

Halle el área y el perímetro de cada paralelogramo.

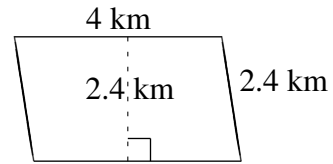


# Área y Perímetro de Paralelogramos (I) Respuestas

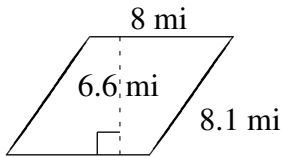
Halle el área y el perímetro de cada paralelogramo.



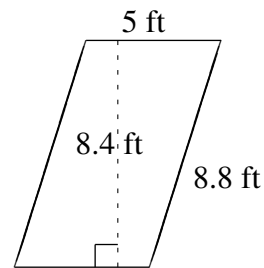
$$A = 16.5 \text{ km}^2$$
$$P = 17.0 \text{ km}$$



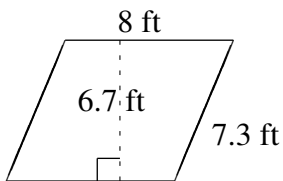
$$A = 9.6 \text{ km}^2$$
$$P = 12.8 \text{ km}$$



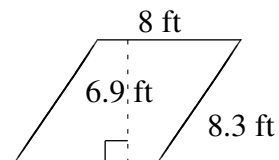
$$A = 52.8 \text{ mi}^2$$
$$P = 32.2 \text{ mi}$$



$$A = 42.0 \text{ ft}^2$$
$$P = 27.6 \text{ ft}$$



$$A = 53.6 \text{ ft}^2$$
$$P = 30.6 \text{ ft}$$



$$A = 55.2 \text{ ft}^2$$
$$P = 32.6 \text{ ft}$$