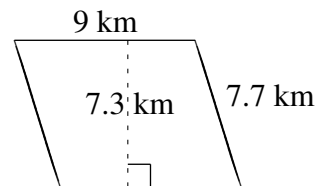
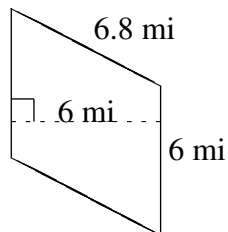
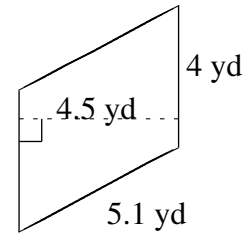
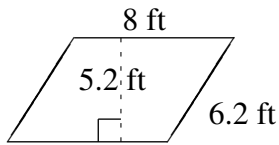
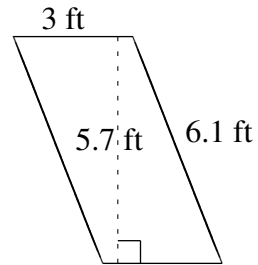
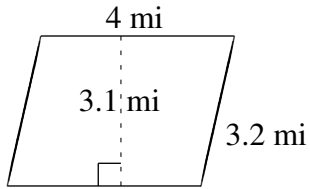


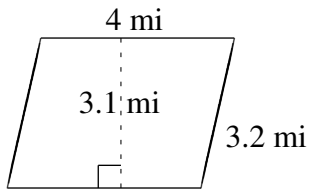
# Área y Perímetro de Paralelogramos (J)

Halle el área y el perímetro de cada paralelogramo.

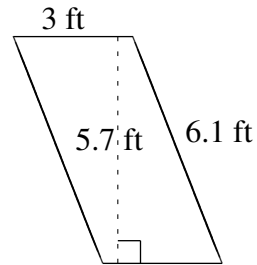


# Área y Perímetro de Paralelogramos (J) Respuestas

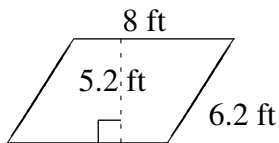
Halle el área y el perímetro de cada paralelogramo.



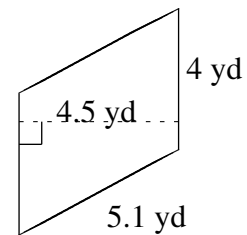
$$A = 12.4 \text{ mi}^2$$
$$P = 14.4 \text{ mi}$$



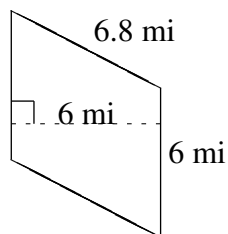
$$A = 17.1 \text{ ft}^2$$
$$P = 18.2 \text{ ft}$$



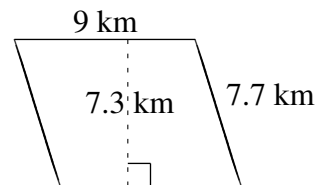
$$A = 41.6 \text{ ft}^2$$
$$P = 28.4 \text{ ft}$$



$$A = 18.0 \text{ yd}^2$$
$$P = 18.2 \text{ yd}$$



$$A = 36 \text{ mi}^2$$
$$P = 25.6 \text{ mi}$$



$$A = 65.7 \text{ km}^2$$
$$P = 33.4 \text{ km}$$