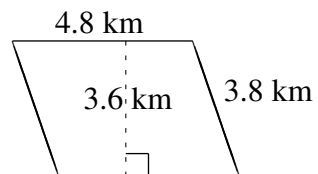
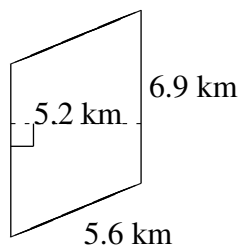
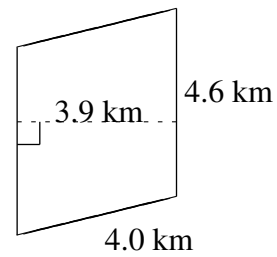
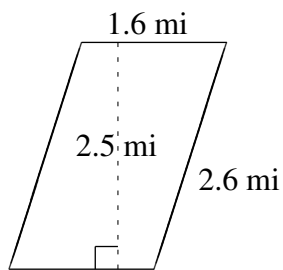
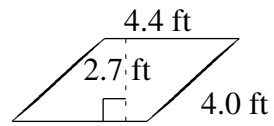
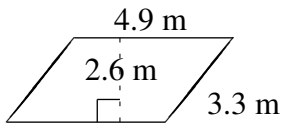


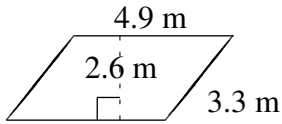
Área y Perímetro de Paralelogramos (I)

Halle el área y el perímetro de cada paralelogramo.

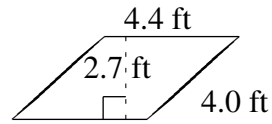


Área y Perímetro de Paralelogramos (I) Respuestas

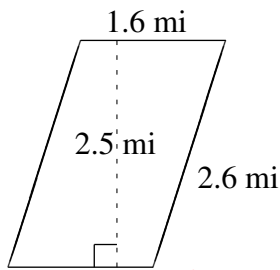
Halle el área y el perímetro de cada paralelogramo.



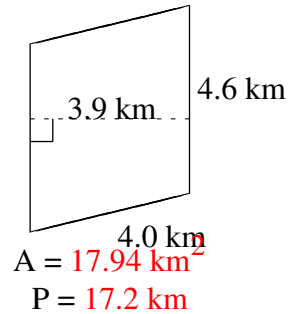
$$A = 12.74 \text{ m}^2$$
$$P = 16.4 \text{ m}$$



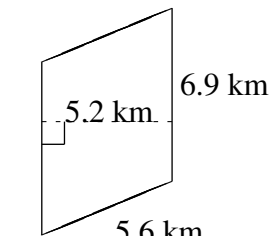
$$A = 11.88 \text{ ft}^2$$
$$P = 16.8 \text{ ft}$$



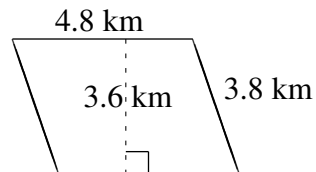
$$A = 4.00 \text{ mi}^2$$
$$P = 8.4 \text{ mi}$$



$$A = 17.94 \text{ km}^2$$
$$P = 17.2 \text{ km}$$



$$A = 35.88 \text{ km}^2$$
$$P = 25.0 \text{ km}$$



$$A = 17.28 \text{ km}^2$$
$$P = 17.2 \text{ km}$$