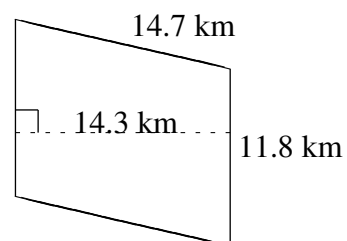
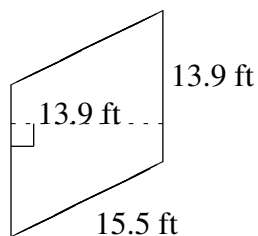
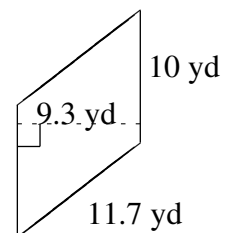
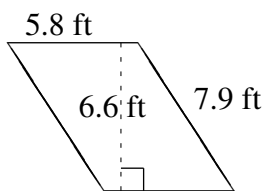
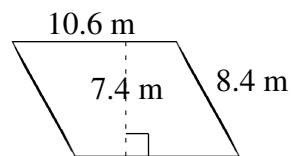
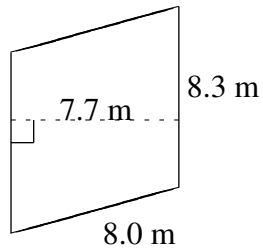


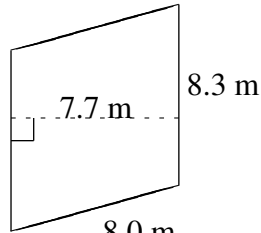
Área y Perímetro de Paralelogramos (F)

Halle el área y el perímetro de cada paralelogramo.

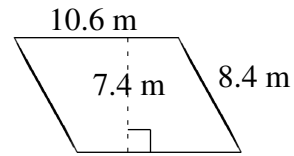


Área y Perímetro de Paralelogramos (F) Respuestas

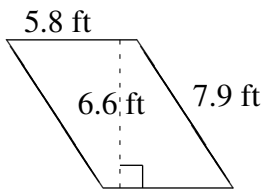
Halle el área y el perímetro de cada paralelogramo.



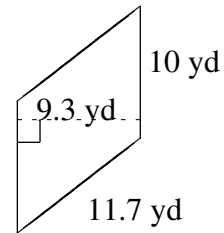
$$A = 63.91 \text{ m}^2$$
$$P = 32.6 \text{ m}$$



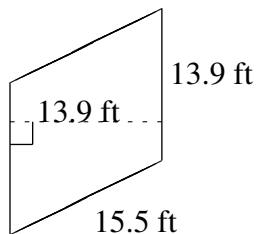
$$A = 78.44 \text{ m}^2$$
$$P = 38.0 \text{ m}$$



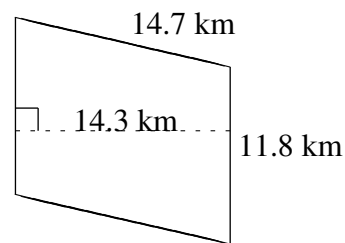
$$A = 38.28 \text{ ft}^2$$
$$P = 27.4 \text{ ft}$$



$$A = 93.0 \text{ yd}^2$$
$$P = 43.4 \text{ yd}$$



$$A = 193.21 \text{ ft}^2$$
$$P = 58.8 \text{ ft}$$



$$A = 168.74 \text{ km}^2$$
$$P = 53.0 \text{ km}$$