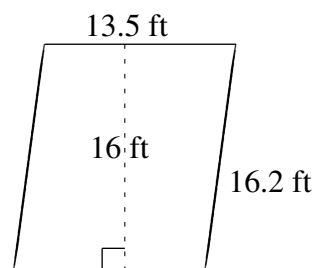
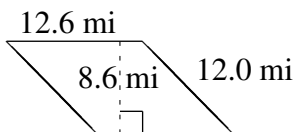
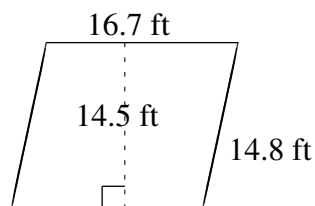
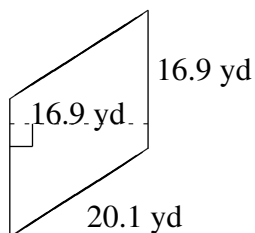
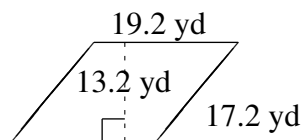
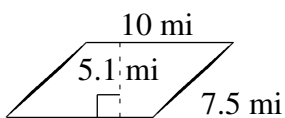


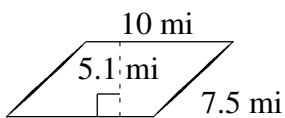
Área y Perímetro de Paralelogramos (J)

Halle el área y el perímetro de cada paralelogramo.

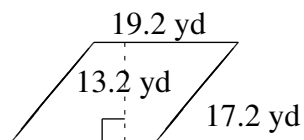


Área y Perímetro de Paralelogramos (J) Respuestas

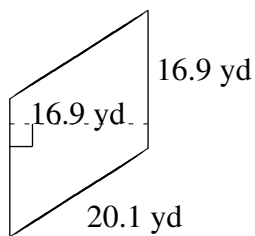
Halle el área y el perímetro de cada paralelogramo.



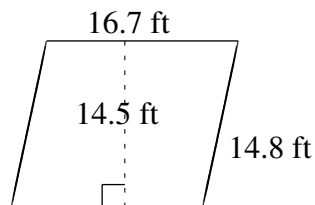
$$A = 51.0 \text{ mi}^2$$
$$P = 35.0 \text{ mi}$$



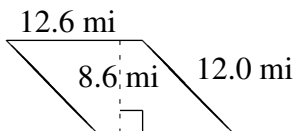
$$A = 253.44 \text{ yd}^2$$
$$P = 72.8 \text{ yd}$$



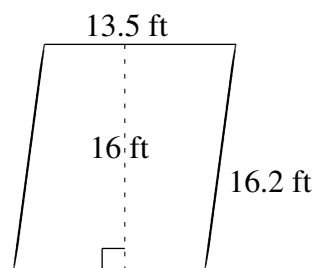
$$A = 285.61 \text{ yd}^2$$
$$P = 74.0 \text{ yd}$$



$$A = 242.15 \text{ ft}^2$$
$$P = 63.0 \text{ ft}$$



$$A = 108.36 \text{ mi}^2$$
$$P = 49.2 \text{ mi}$$



$$A = 216.0 \text{ ft}^2$$
$$P = 59.4 \text{ ft}$$