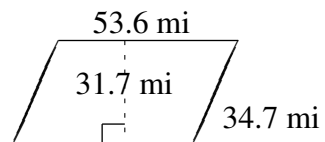
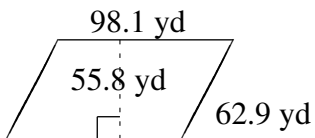
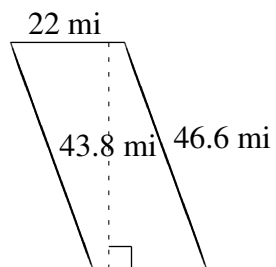
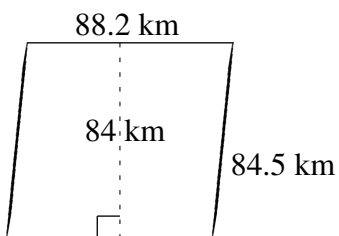
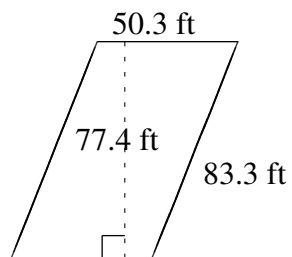
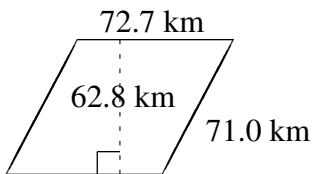


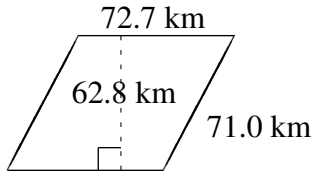
Área y Perímetro de Paralelogramos (A)

Halle el área y el perímetro de cada paralelogramo.

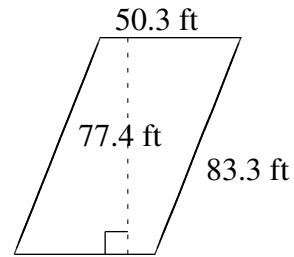


Área y Perímetro de Paralelogramos (A) Respuestas

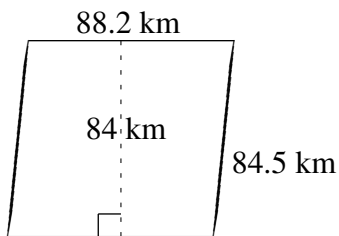
Halle el área y el perímetro de cada paralelogramo.



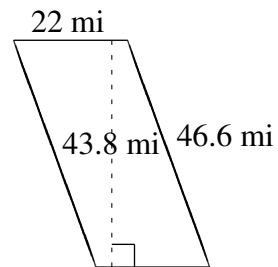
$$A = 4565.56 \text{ km}^2$$
$$P = 287.4 \text{ km}$$



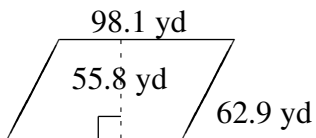
$$A = 3893.22 \text{ ft}^2$$
$$P = 267.2 \text{ ft}$$



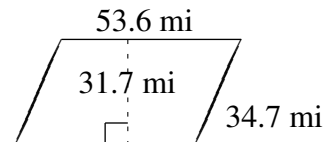
$$A = 7408.8 \text{ km}^2$$
$$P = 345.4 \text{ km}$$



$$A = 963.6 \text{ mi}^2$$
$$P = 137.2 \text{ mi}$$



$$A = 5473.98 \text{ yd}^2$$
$$P = 322.0 \text{ yd}$$



$$A = 1699.12 \text{ mi}^2$$
$$P = 176.6 \text{ mi}$$