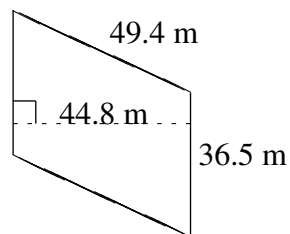
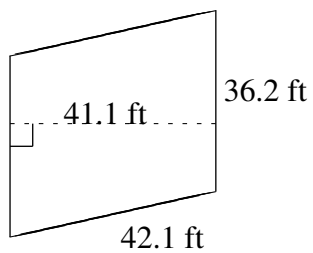
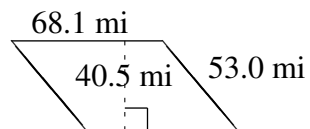
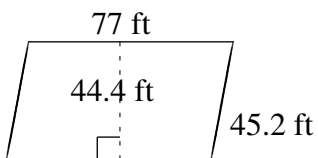
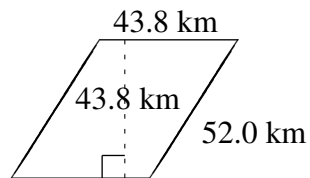
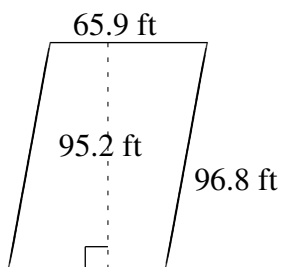


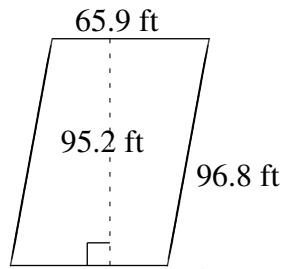
Área y Perímetro de Paralelogramos (B)

Halle el área y el perímetro de cada paralelogramo.

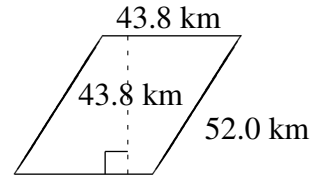


Área y Perímetro de Paralelogramos (B) Respuestas

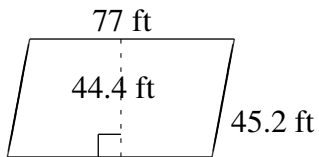
Halle el área y el perímetro de cada paralelogramo.



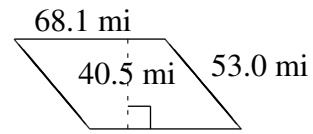
$$A = 6273.68 \text{ ft}^2$$
$$P = 325.4 \text{ ft}$$



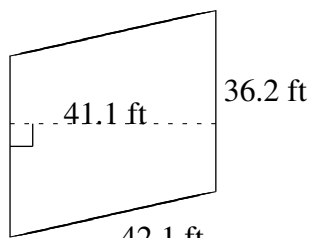
$$A = 1918.44 \text{ km}^2$$
$$P = 191.6 \text{ km}$$



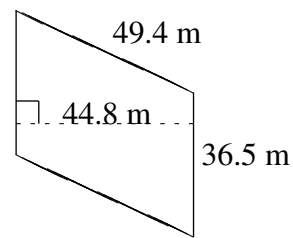
$$A = 3418.8 \text{ ft}^2$$
$$P = 244.4 \text{ ft}$$



$$A = 2758.05 \text{ mi}^2$$
$$P = 242.2 \text{ mi}$$



$$A = 1487.82 \text{ ft}^2$$
$$P = 156.6 \text{ ft}$$



$$A = 1635.20 \text{ m}^2$$
$$P = 171.8 \text{ m}$$