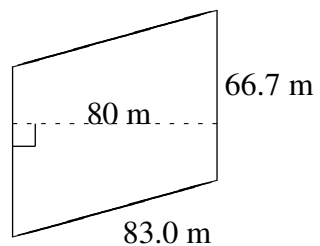
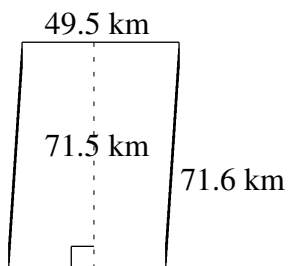
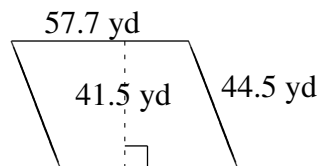
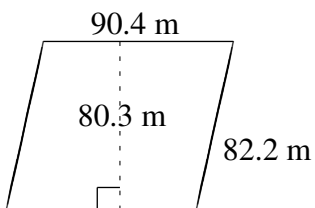
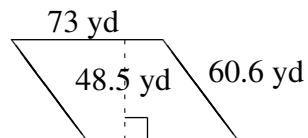
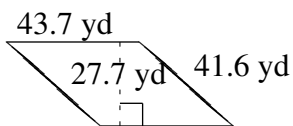


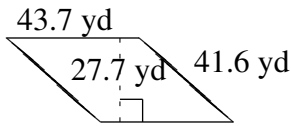
Área y Perímetro de Paralelogramos (C)

Halle el área y el perímetro de cada paralelogramo.

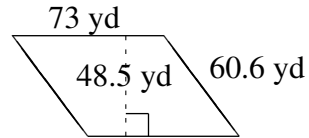


Área y Perímetro de Paralelogramos (C) Respuestas

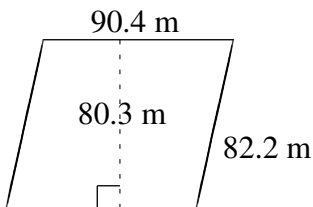
Halle el área y el perímetro de cada paralelogramo.



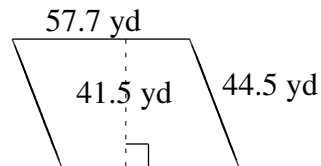
$$A = 1210.49 \text{ yd}^2$$
$$P = 170.6 \text{ yd}$$



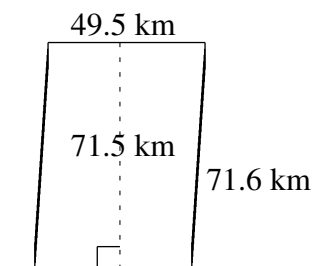
$$A = 3540.5 \text{ yd}^2$$
$$P = 267.2 \text{ yd}$$



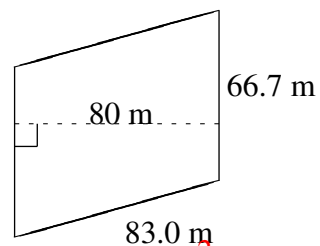
$$A = 7259.12 \text{ m}^2$$
$$P = 345.2 \text{ m}$$



$$A = 2394.55 \text{ yd}^2$$
$$P = 204.4 \text{ yd}$$



$$A = 3539.25 \text{ km}^2$$
$$P = 242.2 \text{ km}$$



$$A = 5336.0 \text{ m}^2$$
$$P = 299.4 \text{ m}$$