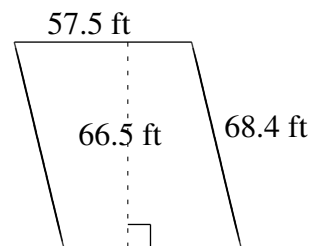
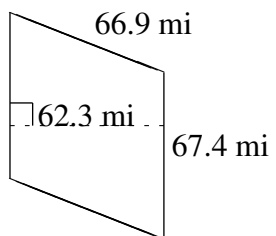
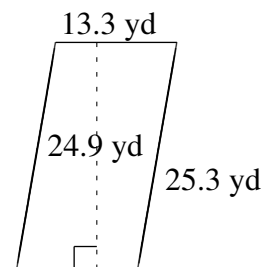
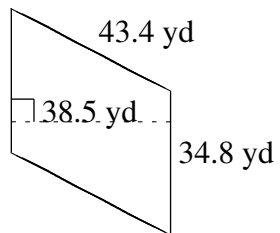
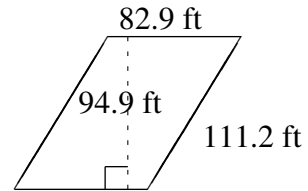
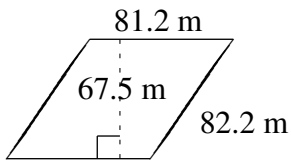


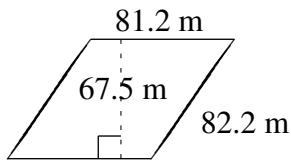
# Área y Perímetro de Paralelogramos (E)

Halle el área y el perímetro de cada paralelogramo.

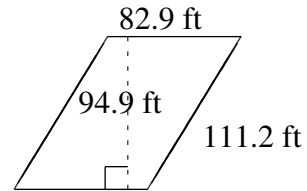


# Área y Perímetro de Paralelogramos (E) Respuestas

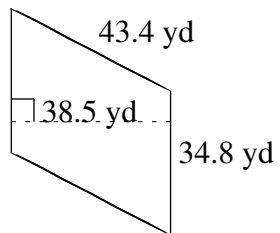
Halle el área y el perímetro de cada paralelogramo.



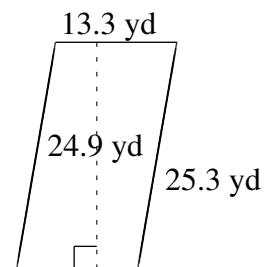
$$A = 5481.00 \text{ m}^2$$
$$P = 326.8 \text{ m}$$



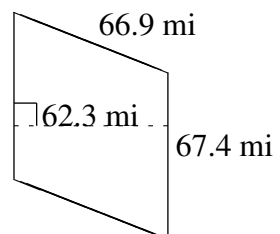
$$A = 7867.21 \text{ ft}^2$$
$$P = 388.2 \text{ ft}$$



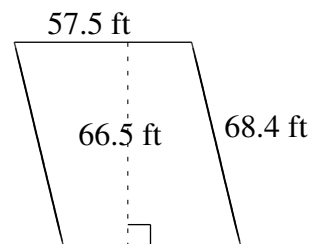
$$A = 1339.80 \text{ yd}^2$$
$$P = 156.4 \text{ yd}$$



$$A = 331.17 \text{ yd}^2$$
$$P = 77.2 \text{ yd}$$



$$A = 4199.02 \text{ mi}^2$$
$$P = 268.6 \text{ mi}$$



$$A = 3823.75 \text{ ft}^2$$
$$P = 251.8 \text{ ft}$$