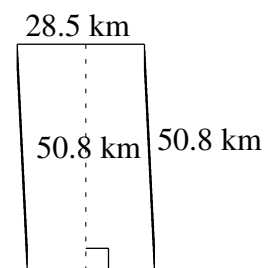
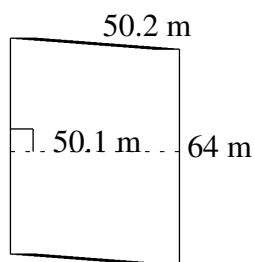
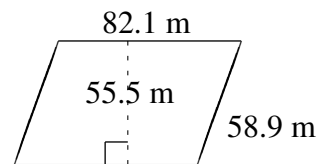
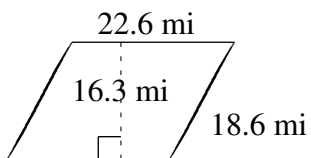
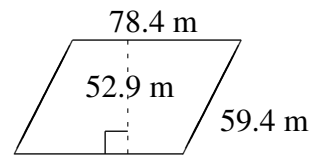
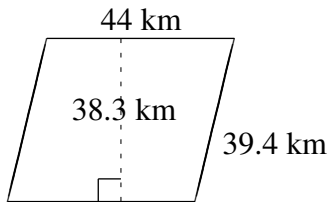


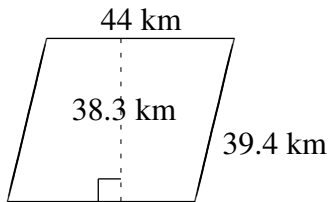
Área y Perímetro de Paralelogramos (F)

Halle el área y el perímetro de cada paralelogramo.

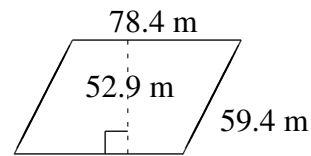


Área y Perímetro de Paralelogramos (F) Respuestas

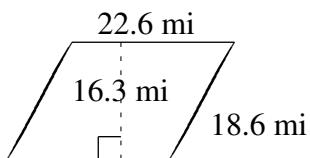
Halle el área y el perímetro de cada paralelogramo.



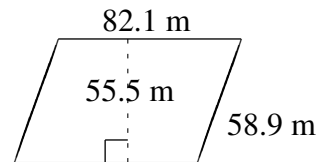
$$A = 1685.2 \text{ km}^2$$
$$P = 166.8 \text{ km}$$



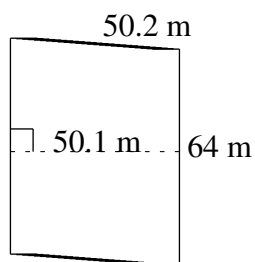
$$A = 4147.36 \text{ m}^2$$
$$P = 275.6 \text{ m}$$



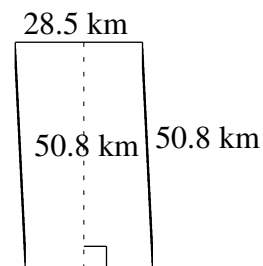
$$A = 368.38 \text{ mi}^2$$
$$P = 82.4 \text{ mi}$$



$$A = 4556.55 \text{ m}^2$$
$$P = 282.0 \text{ m}$$



$$A = 3206.4 \text{ m}^2$$
$$P = 228.4 \text{ m}$$



$$A = 1447.80 \text{ km}^2$$
$$P = 158.6 \text{ km}$$