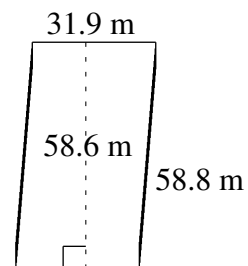
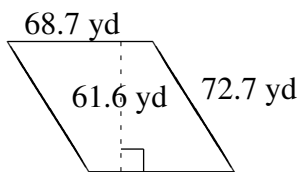
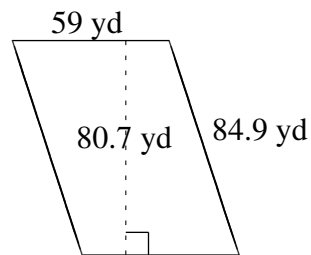
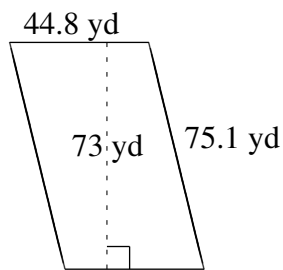
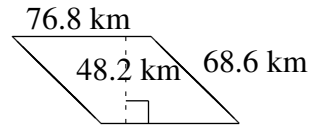
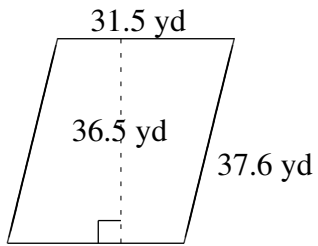


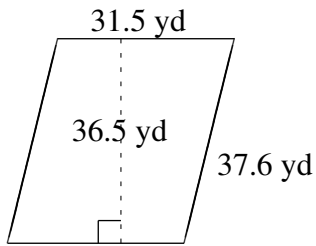
Área y Perímetro de Paralelogramos (I)

Halle el área y el perímetro de cada paralelogramo.

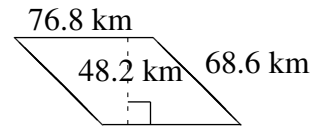


Área y Perímetro de Paralelogramos (I) Respuestas

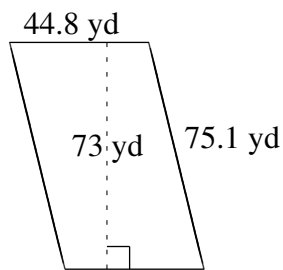
Halle el área y el perímetro de cada paralelogramo.



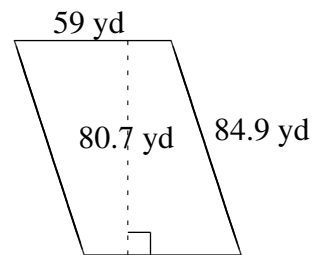
$$A = 1149.75 \text{ yd}^2$$
$$P = 138.2 \text{ yd}$$



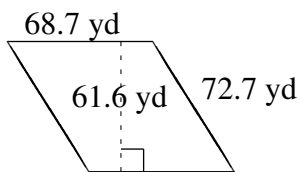
$$A = 3701.76 \text{ km}^2$$
$$P = 290.8 \text{ km}$$



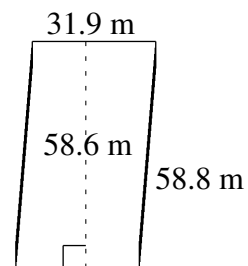
$$A = 3270.4 \text{ yd}^2$$
$$P = 239.8 \text{ yd}$$



$$A = 4761.3 \text{ yd}^2$$
$$P = 287.8 \text{ yd}$$



$$A = 4231.92 \text{ yd}^2$$
$$P = 282.8 \text{ yd}$$



$$A = 1869.34 \text{ m}^2$$
$$P = 181.4 \text{ m}$$