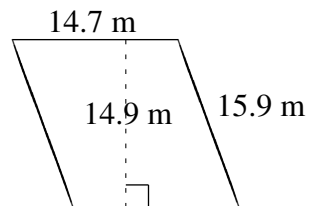
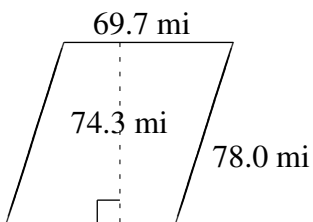
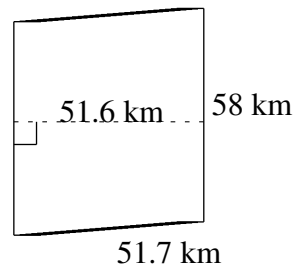
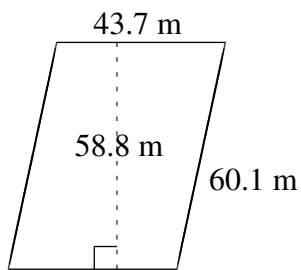
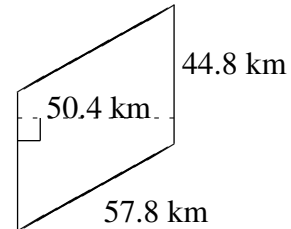
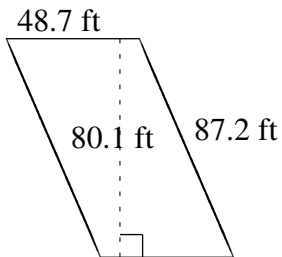


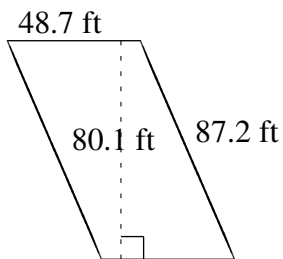
# Área y Perímetro de Paralelogramos (J)

Halle el área y el perímetro de cada paralelogramo.

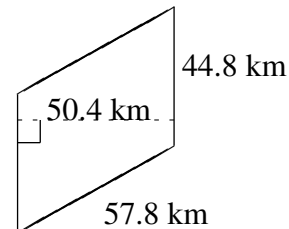


# Área y Perímetro de Paralelogramos (J) Respuestas

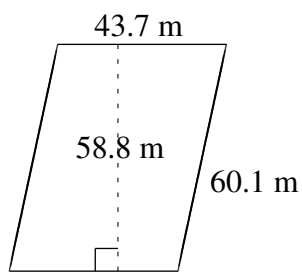
Halle el área y el perímetro de cada paralelogramo.



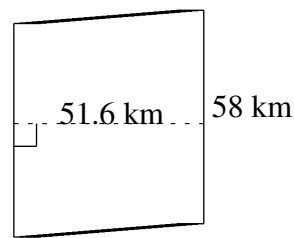
$$A = 3900.87 \text{ ft}^2$$
$$P = 271.8 \text{ ft}$$



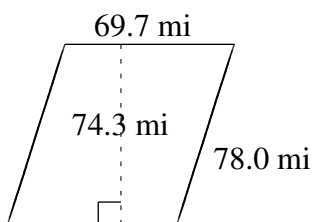
$$A = 2257.92 \text{ km}^2$$
$$P = 205.2 \text{ km}$$



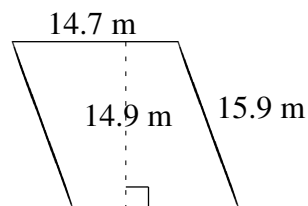
$$A = 2569.56 \text{ m}^2$$
$$P = 207.6 \text{ m}$$



$$A = 2992.8 \text{ km}^2$$
$$P = 219.4 \text{ km}$$



$$A = 5178.71 \text{ mi}^2$$
$$P = 295.4 \text{ mi}$$



$$A = 219.03 \text{ m}^2$$
$$P = 61.2 \text{ m}$$