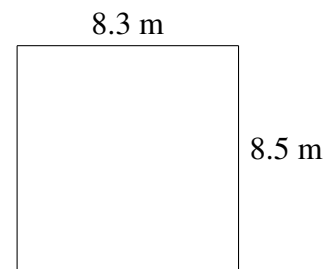
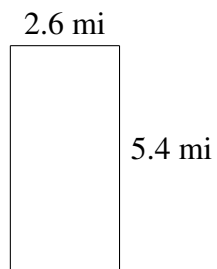
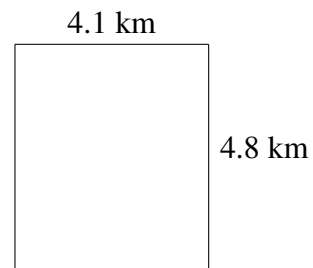
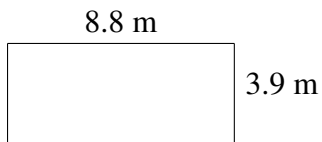
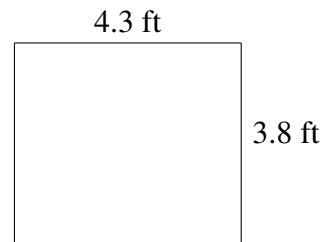
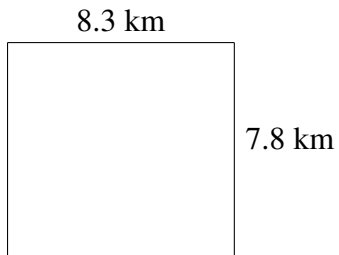


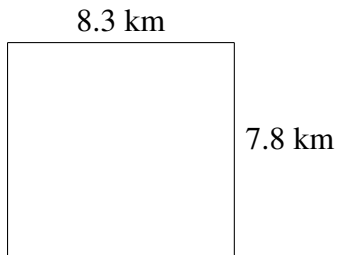
Área y Perímetro de Rectángulos (B)

Halle el área y el perímetro de cada rectángulo.

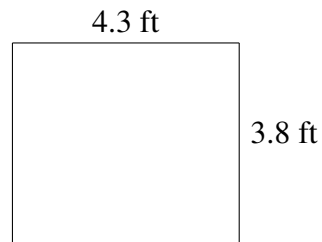


Área y Perímetro de Rectángulos (B) Respuestas

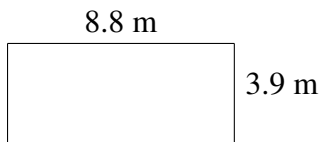
Halle el área y el perímetro de cada rectángulo.



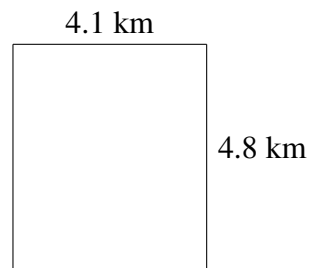
$$A = 64.74 \text{ km}^2$$
$$P = 32.2 \text{ km}$$



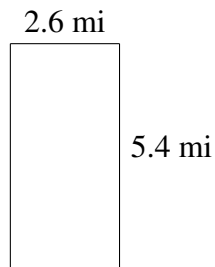
$$A = 16.34 \text{ ft}^2$$
$$P = 16.2 \text{ ft}$$



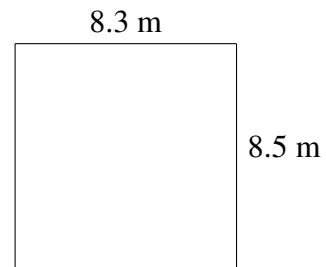
$$A = 34.32 \text{ m}^2$$
$$P = 25.4 \text{ m}$$



$$A = 19.68 \text{ km}^2$$
$$P = 17.8 \text{ km}$$



$$A = 14.04 \text{ mi}^2$$
$$P = 16.0 \text{ mi}$$



$$A = 70.55 \text{ m}^2$$
$$P = 33.6 \text{ m}$$