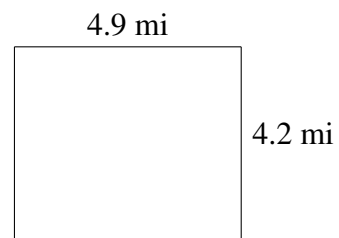
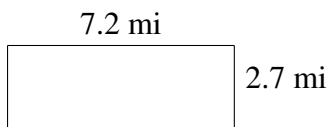
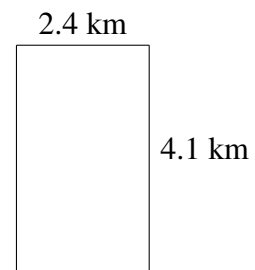
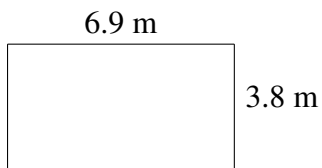
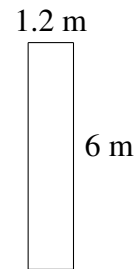



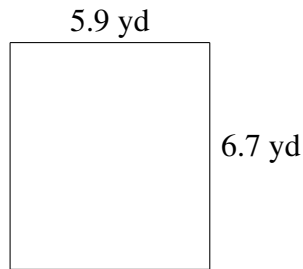
Área y Perímetro de Rectángulos (E)

Halle el área y el perímetro de cada rectángulo.




Área y Perímetro de Rectángulos (E) Respuestas

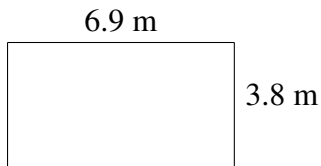
Halle el área y el perímetro de cada rectángulo.



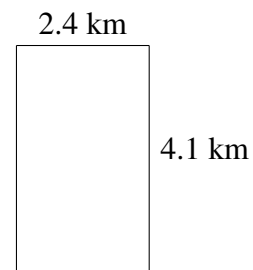
$$A = 39.53 \text{ yd}^2$$
$$P = 25.2 \text{ yd}$$



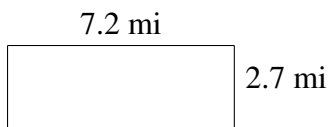
$$A = 7.2 \text{ m}^2$$
$$P = 14.4 \text{ m}$$



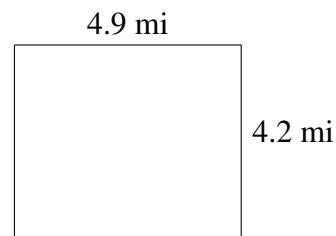
$$A = 26.22 \text{ m}^2$$
$$P = 21.4 \text{ m}$$



$$A = 9.84 \text{ km}^2$$
$$P = 13.0 \text{ km}$$



$$A = 19.44 \text{ mi}^2$$
$$P = 19.8 \text{ mi}$$



$$A = 20.58 \text{ mi}^2$$
$$P = 18.2 \text{ mi}$$