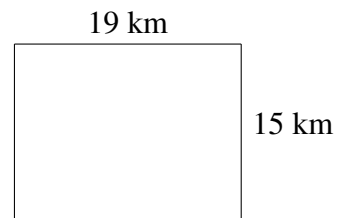
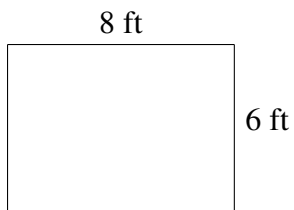
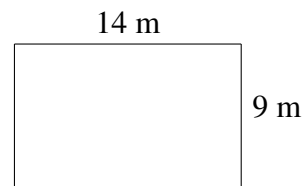
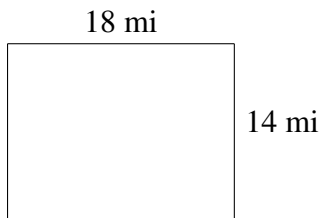
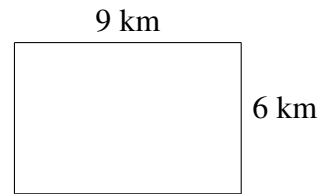
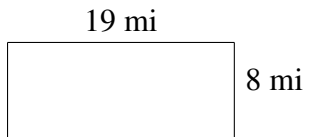


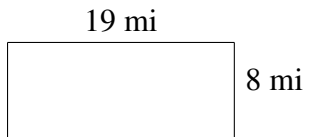
Área y Perímetro de Rectángulos (A)

Halle el área y el perímetro de cada rectángulo.

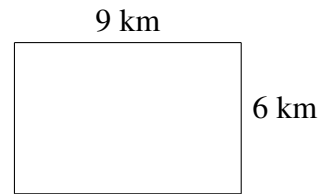


Área y Perímetro de Rectángulos (A) Respuestas

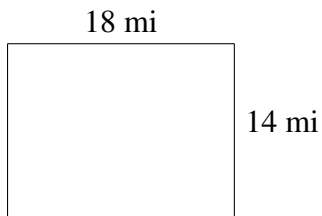
Halle el área y el perímetro de cada rectángulo.



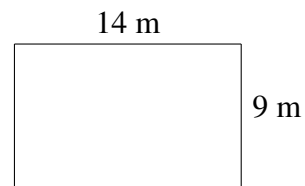
$$A = 152 \text{ mi}^2$$
$$P = 54 \text{ mi}$$



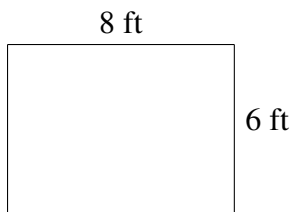
$$A = 54 \text{ km}^2$$
$$P = 30 \text{ km}$$



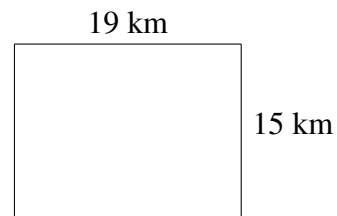
$$A = 252 \text{ mi}^2$$
$$P = 64 \text{ mi}$$



$$A = 126 \text{ m}^2$$
$$P = 46 \text{ m}$$



$$A = 48 \text{ ft}^2$$
$$P = 28 \text{ ft}$$



$$A = 285 \text{ km}^2$$
$$P = 68 \text{ km}$$