
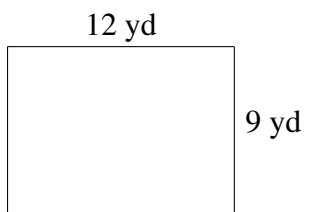
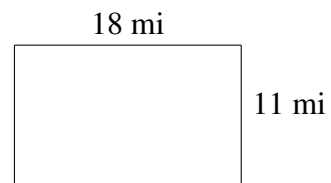
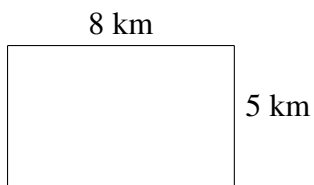
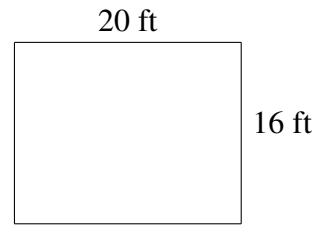
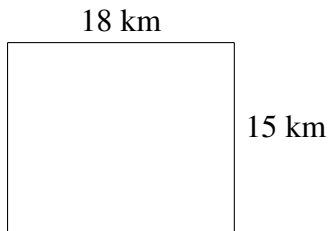


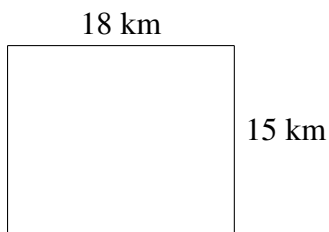
Área y Perímetro de Rectángulos (C)

Halle el área y el perímetro de cada rectángulo.

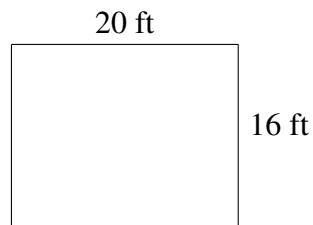


Área y Perímetro de Rectángulos (C) Respuestas

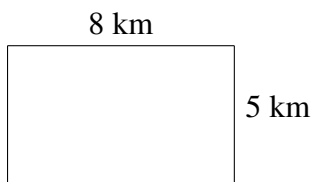
Halle el área y el perímetro de cada rectángulo.



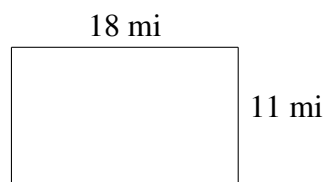
$$A = 270 \text{ km}^2$$
$$P = 66 \text{ km}$$



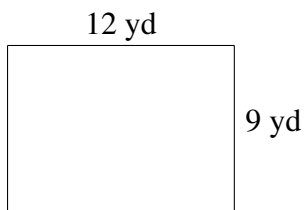
$$A = 320 \text{ ft}^2$$
$$P = 72 \text{ ft}$$




$$A = 40 \text{ km}^2$$
$$P = 26 \text{ km}$$



$$A = 198 \text{ mi}^2$$
$$P = 58 \text{ mi}$$



$$A = 108 \text{ yd}^2$$
$$P = 42 \text{ yd}$$



$$A = 80 \text{ m}^2$$
$$P = 42 \text{ m}$$