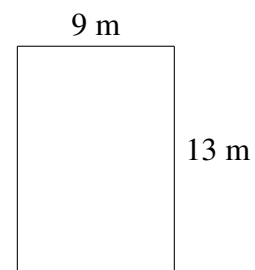
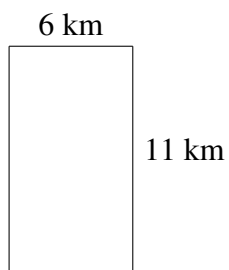
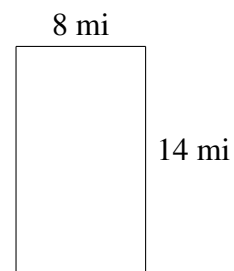

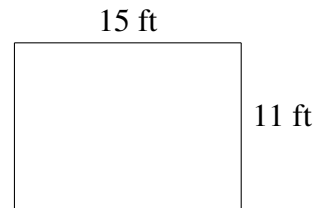
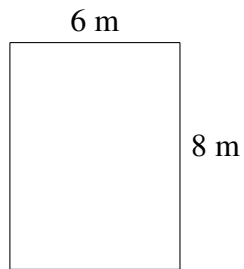


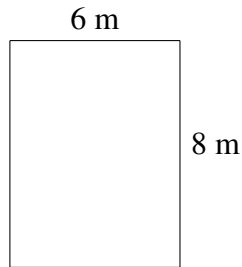
## Área y Perímetro de Rectángulos (J)

Halle el área y el perímetro de cada rectángulo.

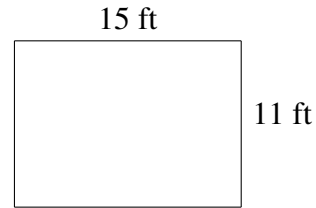


# Área y Perímetro de Rectángulos (J) Respuestas


Halle el área y el perímetro de cada rectángulo.



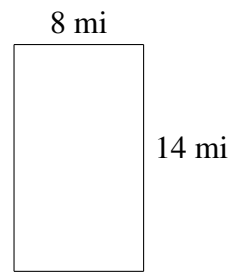
$$A = 48 \text{ m}^2$$
$$P = 28 \text{ m}$$



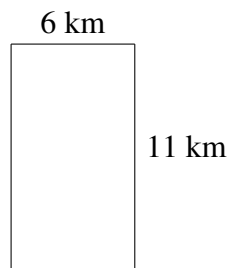
$$A = 165 \text{ ft}^2$$
$$P = 52 \text{ ft}$$



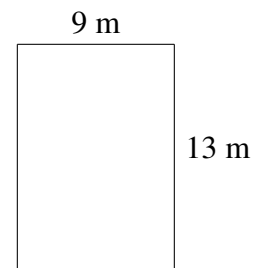
$$A = 60 \text{ km}^2$$
$$P = 34 \text{ km}$$



$$A = 112 \text{ mi}^2$$
$$P = 44 \text{ mi}$$



$$A = 66 \text{ km}^2$$
$$P = 34 \text{ km}$$



$$A = 117 \text{ m}^2$$
$$P = 44 \text{ m}$$