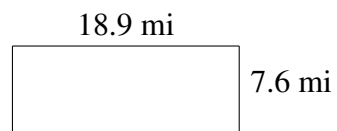
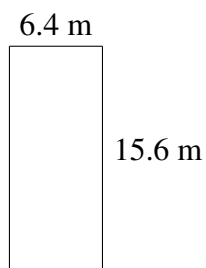

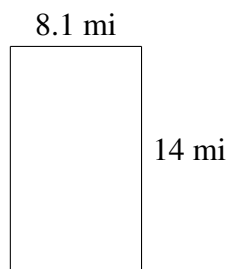
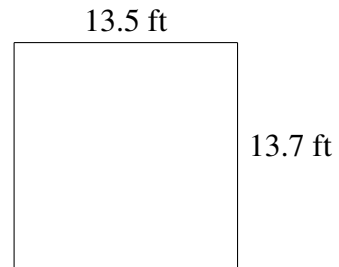
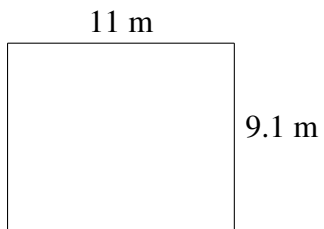


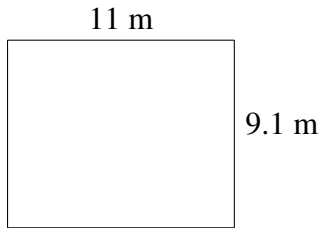
Área y Perímetro de Rectángulos (B)

Halle el área y el perímetro de cada rectángulo.

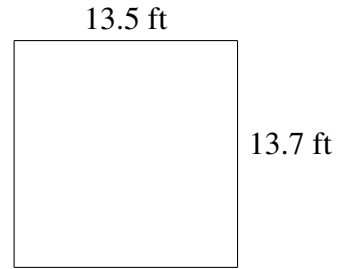


Área y Perímetro de Rectángulos (B) Respuestas

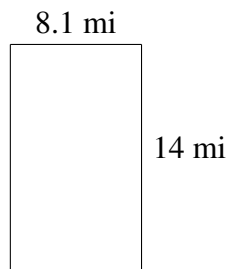
Halle el área y el perímetro de cada rectángulo.




$$A = 100.1 \text{ m}^2$$
$$P = 40.2 \text{ m}$$



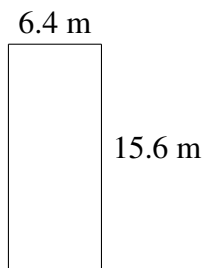
$$A = 184.95 \text{ ft}^2$$
$$P = 54.4 \text{ ft}$$



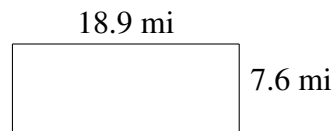
$$A = 113.4 \text{ mi}^2$$
$$P = 44.2 \text{ mi}$$



$$A = 134.46 \text{ km}^2$$
$$P = 49.4 \text{ km}$$



$$A = 99.84 \text{ m}^2$$
$$P = 44.0 \text{ m}$$



$$A = 143.64 \text{ mi}^2$$
$$P = 53.0 \text{ mi}$$