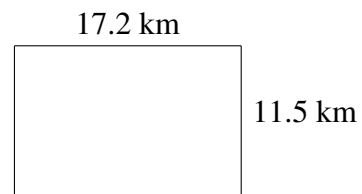
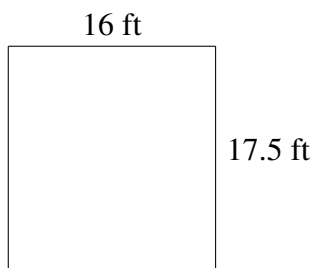

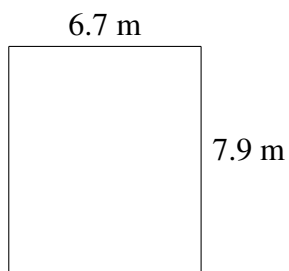
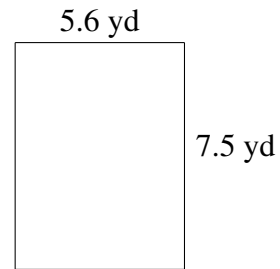
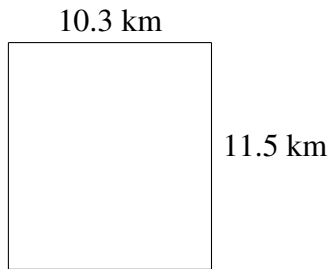


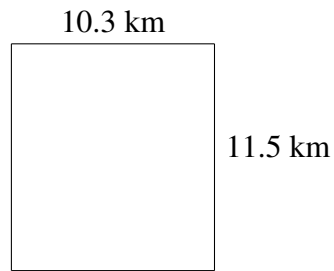
Área y Perímetro de Rectángulos (C)

Halle el área y el perímetro de cada rectángulo.

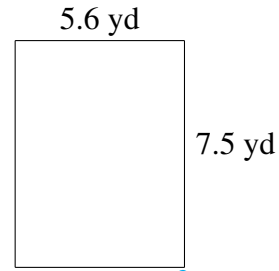


Área y Perímetro de Rectángulos (C) Respuestas

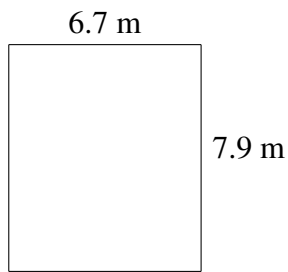
Halle el área y el perímetro de cada rectángulo.



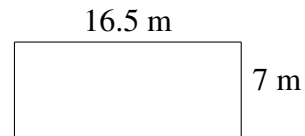
$$A = 118.45 \text{ km}^2$$
$$P = 43.6 \text{ km}$$



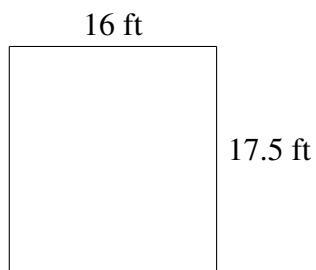
$$A = 42.00 \text{ yd}^2$$
$$P = 26.2 \text{ yd}$$



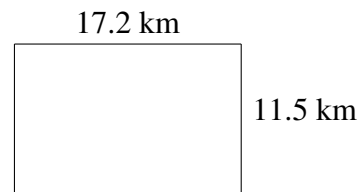
$$A = 52.93 \text{ m}^2$$
$$P = 29.2 \text{ m}$$



$$A = 115.5 \text{ m}^2$$
$$P = 47.0 \text{ m}$$



$$A = 280.0 \text{ ft}^2$$
$$P = 67.0 \text{ ft}$$



$$A = 197.80 \text{ km}^2$$
$$P = 57.4 \text{ km}$$