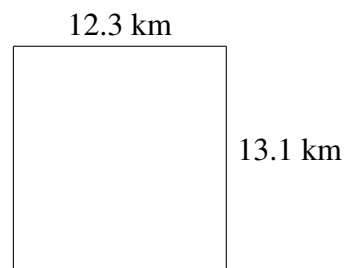
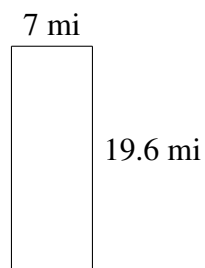
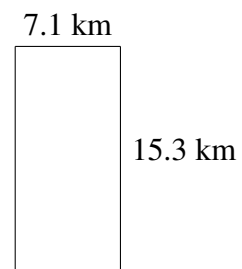
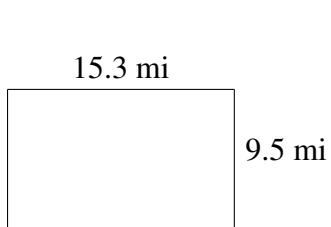
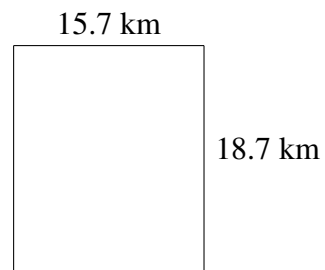
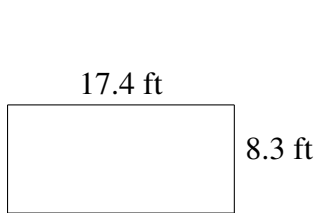


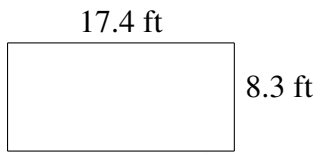
## Área y Perímetro de Rectángulos (D)

Halle el área y el perímetro de cada rectángulo.



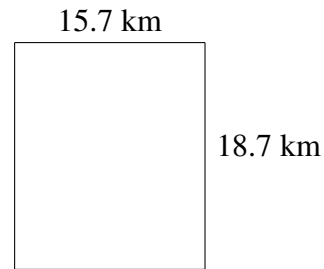
# Área y Perímetro de Rectángulos (D) Respuestas

Halle el área y el perímetro de cada rectángulo.



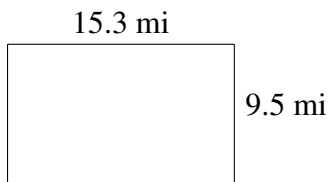
$$A = 144.42 \text{ ft}^2$$

$$P = 51.4 \text{ ft}$$



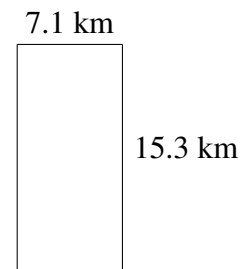
$$A = 293.59 \text{ km}^2$$

$$P = 68.8 \text{ km}$$




$$A = 145.35 \text{ mi}^2$$

$$P = 49.6 \text{ mi}$$



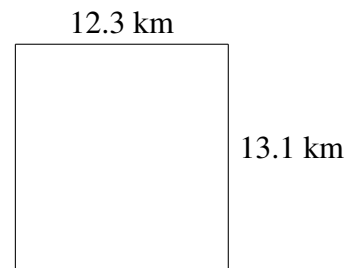
$$A = 108.63 \text{ km}^2$$

$$P = 44.8 \text{ km}$$



$$A = 137.2 \text{ mi}^2$$

$$P = 53.2 \text{ mi}$$



$$A = 161.13 \text{ km}^2$$

$$P = 50.8 \text{ km}$$