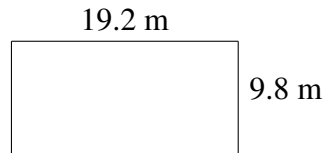

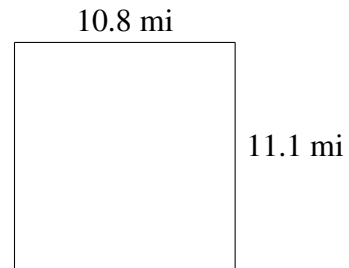
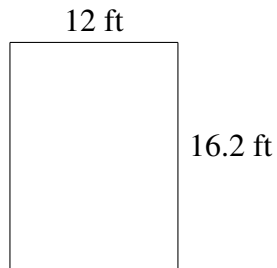
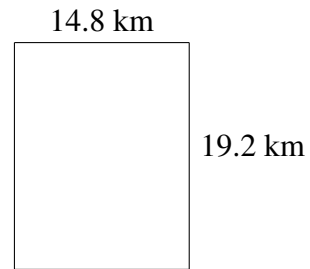
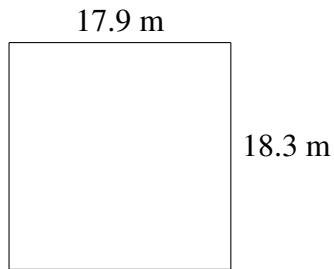


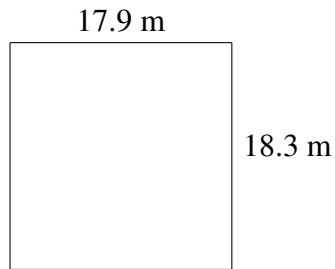
Área y Perímetro de Rectángulos (E)

Halle el área y el perímetro de cada rectángulo.

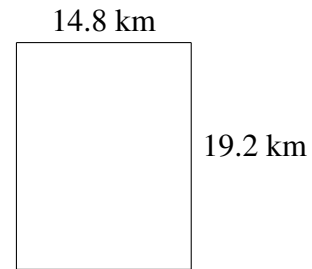


Área y Perímetro de Rectángulos (E) Respuestas

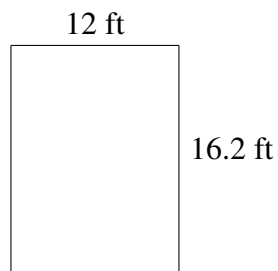
Halle el área y el perímetro de cada rectángulo.



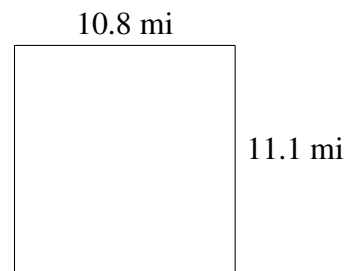
$$A = 327.57 \text{ m}^2$$
$$P = 72.4 \text{ m}$$



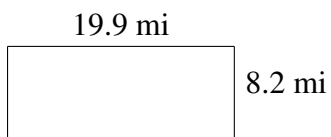
$$A = 284.16 \text{ km}^2$$
$$P = 68.0 \text{ km}$$




$$A = 194.4 \text{ ft}^2$$
$$P = 56.4 \text{ ft}$$



$$A = 119.88 \text{ mi}^2$$
$$P = 43.8 \text{ mi}$$



$$A = 163.18 \text{ mi}^2$$
$$P = 56.2 \text{ mi}$$



$$A = 188.16 \text{ m}^2$$
$$P = 58.0 \text{ m}$$