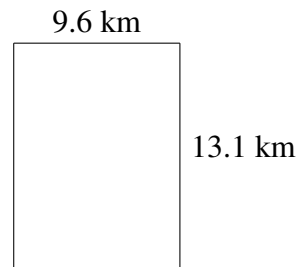
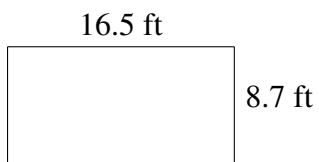
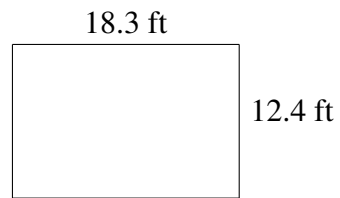
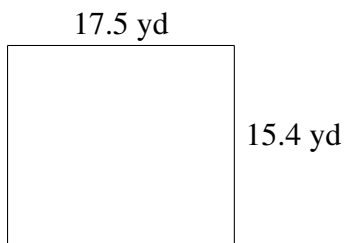
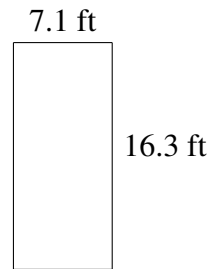




Área y Perímetro de Rectángulos (H)

Halle el área y el perímetro de cada rectángulo.

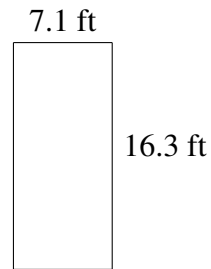


Área y Perímetro de Rectángulos (H) Respuestas

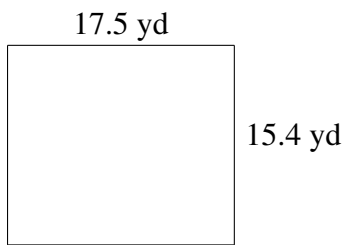
Halle el área y el perímetro de cada rectángulo.



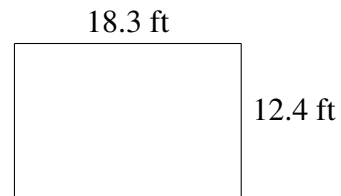
$$A = 86.84 \text{ km}^2$$
$$P = 43.8 \text{ km}$$



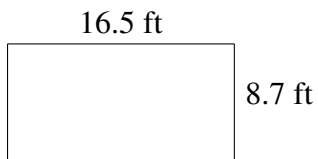
$$A = 115.73 \text{ ft}^2$$
$$P = 46.8 \text{ ft}$$



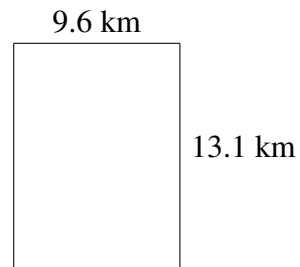
$$A = 269.50 \text{ yd}^2$$
$$P = 65.8 \text{ yd}$$



$$A = 226.92 \text{ ft}^2$$
$$P = 61.4 \text{ ft}$$



$$A = 143.55 \text{ ft}^2$$
$$P = 50.4 \text{ ft}$$



$$A = 125.76 \text{ km}^2$$
$$P = 45.4 \text{ km}$$